

Silver grove school

Practice Set [B]

Biology

Class 8

BIOLOGY

MM:- 40

Instruction :-

SECTION -A

Question 1. Choose the correct option for the following question

[0.5×10=5]

1) Curd is obtained by the action of

- a) bacterium
- b) alga
- c) fungus
- d) virus

2) Apiculture is the practice of rearing

- a) Crop farming
- b) animal husbandry
- c) Bees
- d) silk moth

3) Influenza is transmitted by

- a) Droplet infection
- b) Contaminated water
- c) Soil
- d) Food

4) AIDS is caused by a

- a) Bacteria
- b) Virus
- c) Plasmodium
- d) Protozoa

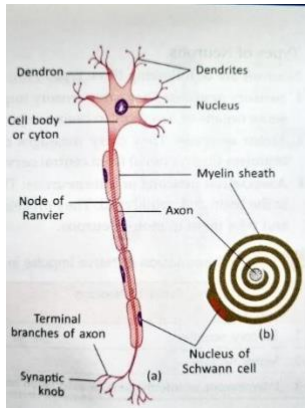
5) This is not a Rabi crop

- a) Wheat
- b) Gram
- c) Cotton
- d) Pea

6) Consider the labelled diagram of a neuron below.

Which part of the neuron receives signals from other neurons and conducts them towards the cell body?

- a) Axon.
- b) Synapse
- c) Dendrites
- d) Myelin



- a) Both assertion and Reason are true
 b) Both assertion and Reason are false.
 c) Assertion is true but Reason is false
 d) Assertion is false but Reason is true
- 7) Assertion:- Salmonella Typhi causes typhoid.

Reason:- Salmonella is a bacteria.

- 8) Silver revolution refers to increased production of
- a) Fish b) Egg
 c) Milk d) Rice
- 9) What branch of agriculture deals with cultivation of flowers?
- a) Horticulture. b) Pisciculture
 c) Silviculture. d) Apiculture
- 10) Sudden and widespread occurrence of disease in an area
- a) Endemic b) Sporadic
 c) Pandemic d) Epidemic

Question 2. Find the odd one out from the following. [0.5×4=2]

1. Proteins, antibodies, vaccine, cancer
2. Scurvy, goitre, thalassemia, influenza
3. Attenuated, killed germ, inactivated germ, Antibiotic
4. Rice, Wheat, Maize, Groundnut.

Question 3. Match the following Column. [0.5×4= 2]

Column A.

Column B

- | | |
|------------------|---------------------------|
| 1) Manure | a) Organic waste |
| 2) Apiary | b) Cow pox |
| 3) Edward Jenner | c) Artificial beekeeping. |
| 4) Polio | d) Pulse polio programme |

Question 4. Fill in the blank's with appropriate words and complete the paragraph. [3]

The improvement in the production of _____ and other _____ during the period 1960-80 is described as _____ in India agriculture. It is known as the _____. The food production was _____ to such an extent that our country became self sufficient in food production because of development of _____ of Rice , Maize , Bajra , Sugarcane.

Question 5. Arrange the following in a logical sequence starting from underlined word. [4]

- i) Bacteria , infection, entry , contact with contaminated product.
- ii) Culling of curd , Pasteurized milk , coagulation of milk, production of cottage cheese iii) Reeling, Silk moth , Eggs , cocoon , Caterpillars , Boiling of cocoon iv) Transplantation, Sowing , germination , Caring , harvesting

SECTION B

Attempt all

Question 5. Answer the following question in brief. [5×1=5]

- i) Why is organic farming better than chemical based farming?
- ii) Describe Apiculture
- iii) List deficiency symptoms of Nitrogen iv) Describe how high yielding varieties are developed v) What was green revolution?

Question 6. Case based questions:- [2×2=4]

- i) Aruhi went on a trip to village she saw a large dairy farm with number of cows under a shed someone told her that these cows are not Indian breeds ? She now has questions answer them
 - a) What do you mean by breed?
 - b) Why Indian cows are not present in the dairy farm why foreign cows are present c) What is white revolution.
- ii) Serious damage to nervous system, brain damage and seizures, adverse effects on respiratory and circulatory systems, increased chance's of heart attack and cardiac failure these are harmful effects
 - a) What do we call substances that induce sleep, feeling of well being , excitement.
 - b) What is other name for such substances
 - c) Give example of such substances .

SECTION C

Question 5. Answer the following in detail. [5×3=15]

- 1) Draw a well labelled schematic diagram of systemic circulation, and brief about it.
- 2) **Make** a flow chart on disease and its modes of transmission
- 3) **Make** a list of Microorganism and there uses in food industry
- 4) **What is a vaccine ? How is it made and why is it made explain.**
- 5) **What leads to loss in food production?**

Silver Grove School
Sample Paper (2025-26)

CLASS- VIII

Set B

SUBJECT: G.K

Time: 2.00Hrs

M.M.:50M

Name: _____

A. Tick (✓) the correct answer. ($10 \times 1 = 10$ Marks)

The largest planet in our solar system is —

- a) Earth
- b) Jupiter
- c) Mars

The national flower of India is —

- a) Rose
- b) Lotus
- c) Lily

The author of Jungle Book is —

- a) Mark Twain
- b) Rudyard Kipling
- c) R. K. Narayan

The full form of ATM is —

- a) Automatic Teller Machine
- b) Any Time Money
- c) Automated Transfer Mode

The organ used for breathing in fish is —

- a) Lungs
- b) Gills
- c) Skin

The capital of Australia is —

- a) Sydney
- b) Melbourne
- c) Canberra

Which gas is most abundant in the air?

- a) Oxygen
- b) Nitrogen
- c) Carbon dioxide

The inventor of the telephone was —

- a) Thomas Edison
- b) Alexander Graham Bell
- c) Newton

Which planet is known as the Red Planet?

- a) Venus

b) Mars

c) Saturn

Who is known as the Father of the Nation (India)?

a) Jawaharlal Nehru

b) Mahatma Gandhi

c) Subhash Chandra Bose

B. Write 'True' or 'False'. (5 × 1 = 5 Marks)

The Sun is a star.

Water freezes at 0°C.

Humans have three lungs.

The Taj Mahal is in Delhi.

Plants make their food by photosynthesis.

C. Fill in the blanks. (5 × 1 = 5 Marks)

The national animal of India is the _____.

_____ is known as the Father of History.

The Earth has _____ natural satellite.

Jana Gana Mana was first sung in the year _____.

The young one of a dog is called a _____.

D. Write two examples/names of each. (5 × 2 = 10 Marks)

Fruits: _____ , _____

Freedom fighters: _____ , _____

Indoor games: _____ , _____

Means of transport: _____ , _____

Festivals of India: _____ , _____

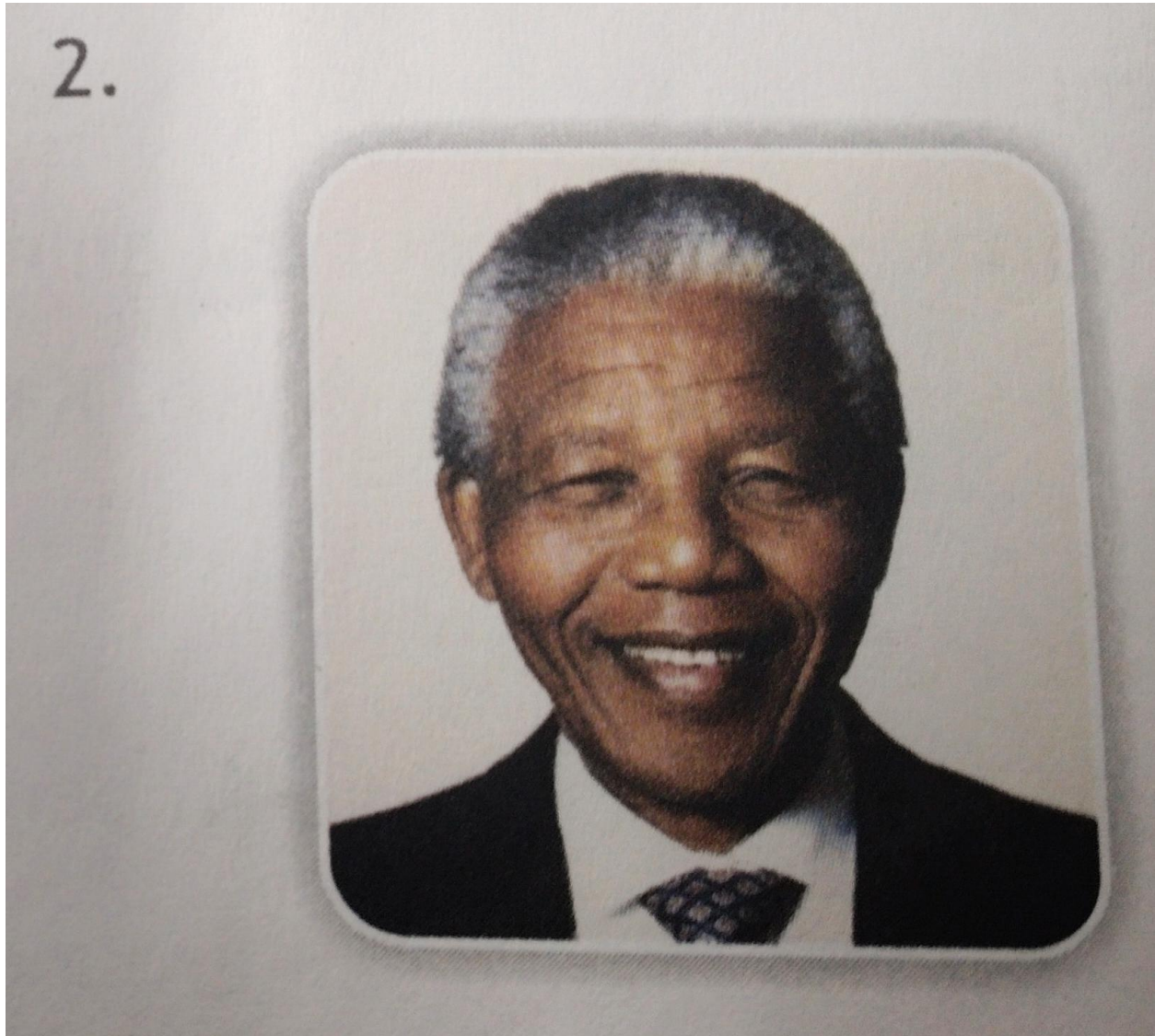
E. Picture Study. (2 × 5 = 10 Marks)

1.



- a) Name the spicy stew.
- b) It is associated with the country

2.



a) Name the person.

b) One important work/achievement of this person.

Class 8

Hindi

Annual

Set B

M.m.100

Time 3:00

सभी प्रश्न अनिवार्य हैं-

प्रश्न (१)- निम्न में से किसी एक विषय पर 150 शब्दों में संक्षिप्त लेख लिखें।(6)

1) हमारा प्यारा भारत

2) श्रम का महत्व

3) महात्मा गांधी

प्रश्न(2)

अपने क्षेत्र की बिजली संकट से उत्पन्न समस्याओं की ओर ध्यान आकर्षित करने हेतु किसी दैनिक के संपादक को पत्र लिखिए।

कक्षा में चोरी की घटनाओं की सूचना के लिए प्रधानाचार्य को पत्र लिखिए।

प्रश्न (३)- नीचे दिए गए चित्र को देखकर एक लेख अथवा कहानी अपने शब्दों में लिखें। (4)



प्रश्न (४)- गद्यांश को ध्यानपूर्वक पढ़िए तथा उसके नीचे लिखे प्रश्नों के उत्तर यथासंभव आपके अपने शब्दों में होने चाहिए-(4)

वर्तमानकाल को विज्ञान का युग माना जाता है। समाचार पत्रों के अतिरिक्त रेडियो और टेलीविजन भी विज्ञापन के सफल साधन हैं। विज्ञापन का मूल उद्देश्य उत्पादक और उपभोक्ता में सीधा संपर्क स्थापित करना होता है। जितना अधिक विज्ञापन किसी पदार्थ का होगा, उतनी ही उसकी लोकप्रियता बढ़ेगी। इन विज्ञापनों पर धन तो अधिक व्यय होता है पर इनमें विक्री बढ़ जाती है। ग्राहक जब इन आकर्षक विज्ञापनों को देखता है, तो वह उस वस्तु-विशेष के प्रति आकृष्ट होकर उस वस्तु को खरीदने के लिए बाध्य हो आता है

1. सही विकल्प के सामने का चिह्न लगाइए।

(1) निम्नलिखित में से कौन-सा विज्ञापन का साधन नहीं है?

(क) पुस्तकें

(ख) टेलीविजन

(ग) रेडियो

(घ) समाचार पत्र

(ii) उत्पादक विज्ञापनों पर धन व्यय करता है

(क) वस्तु के गुण बताने के लिए।

(ख) वस्तु की लोकप्रियता बढ़ाने के लिए।

(ग) वस्तु की बिक्री बढ़ाने के लिए।

(घ) वस्तु को आकर्षक बनाने के लिए।

(iii) निम्नलिखित में से कौन-सा विज्ञापनों का ग्राहकों पर पड़ने वाला प्रभाव नहीं है?

(क) ग्राहक वस्तु के प्रति आकृष्ट हो जाता है।

(ख) ग्राहक वस्तु को नहीं खरीदता।

(ग) ग्राहक वस्तु को खरीदने को बाध्य हो जाता है।

(घ) ग्राहक की दृष्टि में वह वस्तु लोकप्रिय हो जाती है।

(iv) निम्नलिखित में से कौन-सा शब्द 'व्यय' शब्द का विलोम है?

(क) आमदनी

(ख) आय

(ग) कमाई

(घ) खर्च

प्रश्न (५)-निम्नलिखित शब्दों के तीन-तीन पर्यायवाची शब्द लिखिए ॥

(क) सागर

(ख) पुत्र

(ग) आश्रम

(घ) सफल

(च) अग्नि

प्रश्न (६)-निम्नलिखित शब्दों के विलोम शब्द लिखिए । (2.5)

(क) निक्षीर

(ख) कुटिल

(ग) नौकर

() प्राची

() निंदा

प्रश्न (७) अनेक शब्दों के लिए एक शब्द-(2.5)

1. जो नष्ट होने वाला हो

2. बिना पलक झपकाए लगातार देखना

3. जिसका आकार न हो

4. जिसका कोई आश्रय न हो

5. जिसकी धर्म में निष्ठा हो

प्रश्न (८)- दिए गए मुहावरों का अर्थ लिखकर वाक्य में प्रयोग करें ॥

1) खिचड़ी पकाना

2) गुड़ गोबर होना

प्रश्न (९) दिए गए लोकोक्तियों का अर्थ लिखकर वाक्य में प्रयोग करें ॥ (4)

1) धन्ना सेठ के नाती बने हैं

2) जो गरजते हैं वह बरसते नहीं

प्रश्न (१०) निम्नलिखित प्रश्नों के उत्तर लिखिए ॥ (6)

(1) विराम-चिह्न किसे कहते हैं?

(2) विराम चिह्न का भाषा के लिखित रूप में क्या महत्व है?

(3) अव्यय को परिभाषित करते हुए इसके भेद को लिखिए।

प्रश्न (११) दिए गए निर्दोष के अनुसार वाक्य को रूपांतरित कीजिए (2)

- 1) तुमको बाहर जाना है(प्रश्नवाचक)
 - 2) तुम पढ़ाई कर लो (निषेध वाचक)
 - 3) वह कल गांव जाएगा। (संदेह वाचक)
 - 4) मन लगाकर पढ़ना चाहिए। (आज्ञावाचक)
- प्रश्न (१२) निम्नलिखित शब्दों में संधि कीजिए। (2)
- (1)मत + अनुसार
 - (2)भोजन +आलय
 - (3) योग अभ्यास
 - (4) दिक्+अम्बर
- प्रश्न (१३). सही विकल्प पर (२) निशान लगाये। (5)
- (1) काल की भेद है-
 - (क) एक
 - (ख) दो
 - (ग) तीन
 - (घ) चार
 - (2) क्रिया शब्द का मूल होता है-
 - (क) वर्ण
 - (ख) रचना
 - (ग) धातु
 - (घ) प्रकरण
 - (3) क्रिया को करने वाला यदि कर्ता द्वारा प्रेरित कोई अन्य हो तो क्रिया होती है-
 - (क) नाम धातु क्रिया
 - (ख) पूर्वकालिक क्रिया
 - (ग) सहायक क्रिया
 - (घ) प्रेरणार्थक क्रिया
 - (4) 'ओहा शब्द है-
 - (क) विस्मयादिबोधक
 - (ख) समुच्चयबोधक
 - (ग) संबंधबोधक
 - (घ) क्रिया-विशेषण
 - (5) 'कल हम वाराणसी जाएंगे' में क्रिया विशेषण है-
 - (क) स्थान वाचक
 - (ख) रीतिवाचक
 - (ग) परिमाणवाचक
 - (घ) कालवाचक
 - (6) वचन के कितने भेद हैं-
 - (क) एक
 - (ख) दो
 - (ग) तीन
 - (घ) चार
 - (7) रोम में सेंट पीटर्स वसिलिका के संत पोप फ्रांसिस द्वारा मदर टेरेसा को किस उपाधि से गौरवान्वित किया गया?
 - (क) मदर
 - (ख) नन
 - (ग) संत
 - (8) मदर टेरेसा सेंट मेरीज स्कूल में क्या बनीं ?
 - (क) अध्यापिका
 - (ख) प्रिंसिपल

(ग) सेविका

(9). मदर टेरेसा ने धार्मिक शिक्षा कहाँ के मठ में ग्रहण की?

(क) रोम

(ख) आयरलैंड

(ग) कोलकाता

(10). 'मिशनरी ब्रदर्स ऑफ चैरिटी' संस्था किनके लिए बनाई गई?

(क) वृद्धों के लिए

(ख) शिशुओं के लिए

(ग) युवकों के लिए

प्रश्न (१४) गद्य को ध्यानपूर्वक पढ़ें और पूछे गए प्रश्नों का उत्तर दें। (4)

इनका जन्म 26 अगस्त, 1910 ई. को युगोस्लाविया के नगर स्कोपजे में हुआ था। बचपन में इनका नाम एग्नेस गोंझा बोजह्यू था। 18 वर्ष की उम्र में अपनी पढ़ाई पूरी करके एग्नेस ने निर्णय लिया कि वह 'नन' बनेगी। सन 1928 में वह आयरलैंड के एक मठ में भर्ती हुई और धार्मिक शिक्षा ग्रहण की। यहाँ उसे नया नाम मिला-सिस्टर टेरेसा। केवल पाँच माह बाद सन 1929 ई. में उन्हें भारत भेजा गया। यहाँ कोलकाता में सेंट मेरीज स्कूल में अध्यापिका हो गईं। शिक्षिका के रूप में उन्होंने 16 वर्ष कार्य किया। इन वर्षों में वे बांग्ला भाषा लिखना, पढ़ना और बोलना सीख गईं। पर उनका जन्म शिक्षिका बनने के लिए तो हुआ नहीं था, उन्हें तो प्रभु का काम करना था।

(1) मदर टेरेसा का बचपन का नाम क्या था ?

(2) किस उम्र में नम बनने का निर्णय लिया ?

(3) पाठ का क्या नाम है?

(4) किस महिला की कहानी दी गयी है?

प्रश्न (१५) प्रश्नों का उत्तर एक शब्द लिखें.. (3)

1. मदर टेरेसा को संत की उपाधि कब और कहाँ प्रदान की गई ?

2. मदर टेरेसा का जन्म कहाँ हुआ था ?

3. मदर टेरेसा के बाल्यकाल का नाम बताइए।

4. अपंग और अनाथ बच्चों की देखभाल के लिए किस भवन की स्थापना की गई?

5. दीवानों ने छककर क्या पीया ?

6.. रतन सिंह के पिता का नाम बताइए।

प्रश्न (१६) लघु उत्तरीय प्रश्नों का उत्तर लिखें। (6)

1. लिफाफे पर क्या पता लिखा गया था?

2. पत्र सुनकर प्रधान ने गर्व से क्या कहा ?

3. मनीआर्डर आने पर गाँववाले पोस्टमैन का किस प्रकार स्वागत करते थे ?

4. औरतों के विरह गीत में क्या भाव होता था ?

5. दीवानों की मस्ती का आलम कैसा होता है?

6. छककर सुख-दुख के घूंटों को पीने का क्या तात्पर्य है?

प्रश्न (१७) दीर्घ उत्तरीय प्रश्नों के उत्तर लिखें। (14)

(1) भारतीयों की एकता का मूल स्रोत क्या है?

(2) लेखक के अनुसार हमारी शक्ति का हास करने के लिए क्या किया गया और क्यों?

(3) हिंदू, बौद्ध तथा जैन धर्म में क्या-क्या समानताएँ हैं?

(4) संस्कृत ने उत्तर और दक्षिण में भाषाओं को किस प्रकार प्रभावित किया है?

(5) मुवाणी गाँव में दयाराम की जान किस प्रकार खतरे में पड़ गई थी? .

(6) कमस्यारी गाँव का तार ख्यालीराम पांडेय क्यों लेकर गए?

(7) दयाराम ने पांडेय जी के चरण क्यों छुए?

(१८) प्रयोगात्मक. (२०)



SILVER GROVE SCHOOL

Practice set [B](2025-26)

CLASS- VIII

SUBJECT: ENGLISH-I

Time: 2.00Hrs

M.M.:50M

Name: _____

Roll No.: _____

Instructions:

1. Read all the questions attentively.
2. The intended marks for each question are given in brackets [].

Question 1

Write a composition (200-250 words) on any one of the following:

[10M]

- i. *“Is Technology Making Students Smarter or Lazier?”*
(Light argumentative, balanced answers score well)
- ii. Study the picture given below. Write a story or description or an account of what it suggests to you. Your composition may be about the subject of the picture or you may take suggestions



from it; however, there must be a clear connection between the picture and your composition.

Question 2

Select any one of the following:

[6M]

- i. You have joined a new school. Today was the first day of school. It is evening now and you are going to write about your day in your diary. Write about your apprehension about the new school and the students, and how the day turned out to be.
- ii. Write a letter to your friend explaining what you think about continuing the same school and ask about his/her opinion.

Question 3

- i. Write a notice regarding up coming examination in school. [3M]
- ii. Write an e-mail to the editor of a newspaper regarding the condition of slum area Give your suggestions for improvement. [3M]

Question 4

Read the following passage carefully and answer the questions that follow: [5M]

Two roads diverged in a yellow wood
And sorry could not travel both
And be one traveller, long stood
And looked down one as far as Could
To where it bent in the undergrowth;
Then took the other, as just as fair,
And having perhaps the better claim,
Because it was grassy and wanted wear:
Though as for that the passing there
Had worn them really about the same,
And both that morning equally lay
In leaves no step had trodden black.
Oh I kept the first for another day!
Yet knowing how way leads on to way,
I doubted if should ever come back
Shall be telling this with a sigh

Somewhere ages and ages hence:

Two roads diverged in a wood, and I-

I took the one less travelled by,

And that has made all the difference

- i. What do the two roads represent ?
- ii. Why does the poet think that the other roads has a better claim? What does it reveal about his attitude?
- iii. Do you think decision-making is an important factor in a person's life? How does the poet express this thought in the poem?
- iv. Give a title in context of this poem on your own.
- v. Write a short summary in your own words.

Question 5

- i. Read the passage given below, and fill in each of the numbered blanks with the suitable articles. Write *no article* where no article is used. Do not copy the passage and write in correct serial order. [5M]

Last month, our school organised a) ____ educational trip to b) ____ historical monument in our city. It was c) ____ ancient fort built by d) ____ Mughal emperor. We left early in e) ____ morning and reached there by f) ____ bus. g) ____ guide explained the history of h) ____ fort in very interesting manner. It was truly i) ____ unforgettable experience for all of us.

- ii. Complete the sentences using *-ing* adjective or *-ed* adjective. [4M]

1. Sham looked by the amazing set of building blocks.

- a) Fascinated b) Fascinating

2. I felt after just a short visit to the hills.

- a) Invigorating b) Invigorated

3. At the thought of staying alone, Jonna began to cry.

- a) Terrified b) Terrifying

4. The recent downward trend in poverty seems.....

- a) Encouraged b) Encouraging

- iii. Choose the correct adverb . [4M]
1. If you don't practice, you won't get selected in the team. (**Harder/ hardly/more hard**).
 2. After the accident Kriti drives now. (**Less carefully/ more carefully/ carefully than**)
 3. Dana expresses herself..... Before. (**Better/better than/ more well than**).
 4. Mary can run..... Jane. (**Faster/ faster than/ slower than**).
- iv. Choose the sentences that mean the same as the sentence in colour. There may be two correct answers. [4M]
1. **As well as being a good singer, Joseph is also a talented guitarist.**
Joseph is a good singer besides being a talented guitarist.
Not only can Joseph sing well, but he is also a talented guitarist.
 2. **I watched the film despite feeling tired.**
As I felt tired, I watched the film.
Even though I felt tired, I watched the film.
 3. **None of the hotels near the beach is fully booked except for the sea view.**
All the hotels near the beach are fully booked and is is the sea view.
Apart from the sea view, the hotels near the beach are not fully booked.
 4. **Since it was snowing, the football match was cancelled.**
The football match was cancelled on account of the snow.
The football match was cancelled seeing that it was snowing.
- v. Complete the sentences with the words given.
[3M]
1. (Few/ a few)..... tourists visit the island as there are only.....beaches where it is safe to swim.
 2. (No one/ none)..... of the people I asked could give me directions to the new library; seemed to know where it was.
 3. (Plenty/ a lot of)..... People offered to help, so don't ask for any more volunteers. We've got.....
- vi. Choose the correct answer [4M]
1. Never before(we/see) such heavy rain as we did last week.

2. Only after we have decorated the flat..... (we/ be able to) move in.
3. I was late for the concert and so (my friends/be)
4. Not only..... (Customers/ can order) goods online, but also by phone.

vii. Choose the correct answer [2M]

1. Going to that film was a **complete/ completely** waste of time.
2. We'd better go home – it's getting **dark/ darkly**.
3. If you feel a bit sick, try to breathe **deep/ deeply**
4. There's something wrong with this fish- it smells **bad/ badly**.

Question 6

- i. Write the synonyms of the following words. [1.5M]
 1. Inevitable
 2. Lenient
 3. Illuminate

- ii. Write the antonyms of the following words. [1.5M]
 1. Humane
 2. Firid
 3. Dismal



SILVER GROVE SCHOOL

Practice Set [B] (2025-26)

CLASS- VIII

SUBJECT: ENGLISH- II

Time:2:00Hrs

M.M.:50M

Name: _____

Roll No.: _____

Instructions:

1. Read all the questions attentively.
2. The paper has three sections.
3. The intended marks for each question are given in brackets [].

SECTION-A

(Multiple Choice Questions)

Question 1

Choose the correct options to the questions from the given options:

[10M]

- Who does the Ancient Mariner stop?
 - The Bridegroom
 - One of three wedding guests
 - The helmsman
 - The albatross
- Why does the Wedding-Guest initially want to leave?
 - He is afraid
 - He is angry
 - He wants to attend the wedding feast
 - He hears someone calling him
- What makes the Wedding-Guest stand still and listen?
 - The Mariner's story
 - The Mariner's glittering eye
 - The sound of the wedding music
 - The arrival of the ship
- Why were the boys staying at the baths instead of Dexter's house?
 - The house was under repair
 - They preferred camping
 - One of the Dexter boys had measles
- The house was too small
- How is Trevor physically described in the passage?
- Tall and heavily built
 - Short but strong and tough

- Weak and thin
- Fat and lazy
- Why had Trevor become popular in the school?
 - Because of his good looks
 - Because of his wealth
 - Because of his success in games and captaincy
 - Because of his
- Who narrates the story of the ruined statue in the poem?
 - Ozymandias himself
 - A traveller from an antique land
 - The sculptor
 - The poet directly
- What remains of the statue in the desert?
 - A complete statue
 - A golden crown
 - Two vast and trunkless legs and a shattered face
 - A palace
- What expression is seen on the shattered face?
 - Kindness and sympathy
 - Joy and pride
 - Anger and cold command
 - Fear and sadness
- What message is written on the pedestal?
 - “I ruled the world.”
 - “Look on my works, ye Mighty, and despair!”
 - “Power lasts forever.”
 - “Respect the king.”
- What surrounds the broken statue?
 - A flourishing city
 - Mountains and rivers
 - Boundless and bare sands
 - A great army

SECTION – B
(Extract Based Questions)

Question 2

Read the extract given below and answer the questions that follow:

[3M]

- i. *“Luckily, they were the ones he was wearing when he last saw his father”.*

- a. Who was the father and the son?
- b. Why did Watson use the term 'luckily'.

OR

- ii. *I must do my duty. Please leave me alone with these gentlemen?*
 - a. What is the 'duty' mentioned here?
 - b. What was the outcome of the speaker talking to the gentlemen?

Question 3

Read the extract given below and answer the questions that follows;

[3M]

- i. "*I immediately regretted what I had done, but it was too late*"
 - a. Who was the speaker? What was the action that the speaker regretted?
 - b.it was too late.— What do these words indicate?
 - c. What did the speaker do soon after this?

OR

*Behold her, single in the field,
Yon solitary Highland lass!
Reaping and singing by herself;
Stop here, or gently pass!*

- a. The poet has introduced a spatial dimension in these four lines of the poem. Elucidate.

Question 4

Read the extract and answer the questions that follow: [3M]

"But I have had worse things than that, he thought.

- a. Explain the context.
- b. Why did the fisherman not feel good at the moment?

OR

- ii. *He said, "wolves are so misunderstood".*

- a. How are wolves misunderstood?
- b. What is the fact opposing the above misunderstanding.

SECTION-C
(Recall & Analysis)

Question 5

Write the meaning of the given words and frame the sentences in your own words: [6M]

- | | | |
|-------------|-----------------|----------------|
| i. Eulogies | ii. Flourishing | iii. Exhausted |
| iv. Shunted | v. Filigree | vi. Pawned |

Question 6

State whether the following statements are true or false: [5M]

- i. Oliver falsely accuses Orlando of spending money.
- ii. Oliver loves Orlando, so he tries to dissuade him from the wrestling match.
- iii. Celia thinks that she loves Rosalind more than Rosalind loves her.
- iv. The color of the sea was same as that of the old man eye.
- v. At night, the boat passed an island of Sargasso weed.

Question 7

Fill in the blanks with appropriate words. [5M]

- i. Watson and Holmes met _____ at the site of the murder.
- ii. It was assumed that McCarthy was hit with the _____.
- iii. Mr. Turner and his gang used to rob the convoys that left the _____.
- iv. _____ population increased with the return of the wolves to the park.
- v. Extinction of wolves led to disappearing of _____ and _____.

Question 8

Answer *any six* of the following questions in 10-20 words: [6M]

- i. Whom does the Mariner stop and why ?
- ii. What might the '*long grey beard*' and '*glittering eye*' indicate?
- iii. Why do the ladies plead Orlando to withdraw from the wrestling match?
- iv. What is the motive behind Oliver getting Orlando into a fight against Charles?
- v. *And that remarked silenced Trevor*. Which remark? Why?
- vi. What do you infer about Mr Dexter from the story?
- vii. Why was Mr Turner afraid of Charles McCarthy?

Question 9

Answer of the following questions in 40-60 words: [6M]

- i. What was the assumed weapon and the actual weapon used for committing the crime?
- ii.*because I knew there would be a price on my head in Australia.* Explain the context of these words.
- iii. With whom was Trevor's captaincy skills compared and how?

Question 10

Analyze and answer the questions given below:

[3M]

- i. Write the summary of the story "As you like it".
- ii. Write the central idea of the poem "The Rime of the Ancient Mariner".

Silver Grove School
Annual Exam [2025- 2026]
CLASS VIII
SUBJECT: MATHEMATICS
M.M. 80
TIME: 3:00 Hrs

Instructions:

1. Read all questions carefully.
 2. It is compulsory to attempt all sections.
 3. Marks for each section are indicated.
 4. Show all steps clearly in your solutions.
 5. Use appropriate formulas and identities where necessary.
 6. Neat and clean presentation of answers will be appreciated.
-

SECTION-A

[10×1 = 10]

- Q1.** Which of the following can not be the probability of an event ?
a) 0.8 b) $\frac{2}{7}$ c) 1 d) -5
- Q2.** How many faces does a cube have ?
a) 5 b) 8 c) 6 d) 12
- Q3.** If $2x - 5 = x + 7$, then the value of x :
a) 12 b) 6 c) 8 d) 9
- Q4.** The formula for calculating principal is ?
a) $\frac{PR}{100}$ b) $\frac{PRT}{100}$ c) $\frac{RT}{100}$ d) *none of these*
- Q5.** Which of the following number is divisible by 5
a) 45387 b) 45380 c) 45991 d) 78672
- Q6. Fill in the blanks.**
a) Total surface area of cuboid is
- b) Cube root of 216 is
- c) Square root of 2.89 is
- d) Volume of cuboid is
- e) Probability of impossible event is

SECTION-B

[3×10 = 30]

[Attempt any 10 questions from this sections]

- Q7.** 13 and 31 is a strange pair of numbers such that their squares 169 and 961 are also Mirror images of each other. Fine two more such pairs.
- Q8.** Three consecutive whole numbers are such that if they be divided by 5, 3 and 4 respectively the sum of the quotient is 40. Find the numbers.
- Q9.** A die is thrown once. Find the probability of getting :
a) a prime even number
b) a number greater than 4
c) a number other than 1 and 5

- d) a number less than 3
- e) a number greater than 0.

Q10. Solve and graph the solution set on a number line :

$$\frac{2x}{3} + 5 < \frac{x}{2} + 6 ; x \text{ belongs to Whole number}$$

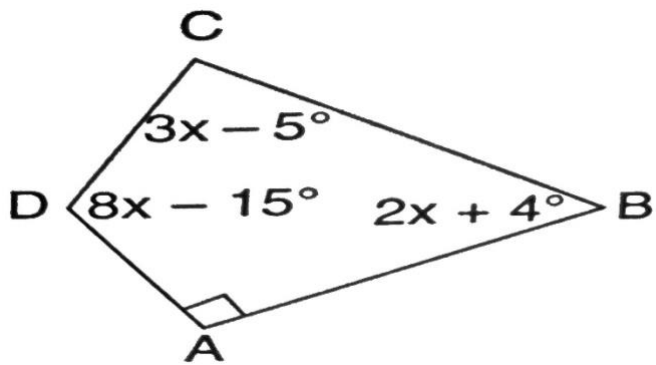
- Q11.** What is the least number by which 6750 may be divided so that the quotient is a Perfect cube ?
- Q12.** If $12x4$ is divisible by 4, find all the possible value of x.
- Q13.** Factorise : i) $3a^2 - 5a + 2$ ii) $25a^2 - 36b^2$
- Q14.** The total surface area of a cylinder of diameter 10 cm is 330 cm sq. Find the height of the cylinder.
- Q15.** A man sold his bicycle for Rs 405 losing one – tenth of its cost price. Find its cost Price and the loss percent.
- Q16.** John belongs to Delhi. He buys goods worth Rs 25,000 from a shop in Delhi. If the rate of GST is 5%, find how much money in all, will John pay for these goods ?
- Q17.** Calculate the amount and the compound interest on Rs 8,000 for 3 years at 5% per annum.

SECTION - C

[5×8 = 40]

[Attempt any 8 questions from this questions]

- Q18.** Find the number of sides in a regular polygon, if its each interior angle is :
- i) 160° ii) 135°
- Q19.** Use Euler's formula to find the values of x and y.
- i) Faces = x, Vertices = 15, Edges = 20
 - ii) Faces = 6, Vertices = y, Edges = 8
- Q20.** A bag contains 3 white , 5 black and 2 red balls, all of the same size. A ball is Drawn from the bag without looking into it, find the probability that the ball is :
- i) a black ball ii) a red ball iii) a white ball
 - iv) not a red ball v) a green ball
- Q21.** The curved surface area of a cylinder is $17,600 \text{ cm}^2$ and the circumference of its base is 220 cm. Find the height and the volume of the cylinder.
- Q22.** The present age of man is twice that of his son. Eight year hence, their ages will be in the ratio 7:4. Find their present ages.
- Q23.** Find the value of x in the given figure:



- Q24.** How many persons can be accommodated in a big hall of dimensions 40 m, 25m and 15 m, assuming that each person requires 5 m^3 of air ?
- Q25.** After 12 years, I shall be three times as old as I was 4 years ago. Find my present age.
- Q26.** Rajat purchases a wrist watch costing rupees 540. The rate of tax is 8%. Find The total amount paid by Rajat for the watch.

Silver grove school

(Sample Paper)

Set-B

Class 8

Class 8 – Physics

Time Allowed: Two Hours

Maximum Marks: 40

Instructions

Answers to this Paper must be written on the paper provided separately.

You will not be allowed to write during the first 15 minutes.

This time is to be spent in reading the question paper.

Section A is compulsory.

Question Number 9 is compulsory.

Attempt any other three questions from Section B.

The intended marks for questions or parts of questions are given in brackets [].

SECTION A

(Attempt all questions from this Section)

Question 1: Multiple Choice Questions

(Do not copy the question. Write the correct answer only.)

[15]

(i) The number of vibrations or oscillations per second is called.

- (a) amplitude
- (b) time period
- (c) wavelength
- (d) frequency

(ii) The collection of tones is called a

- (a) note
- (b) harmonic
- (c) monotone
- (d) overtone

(iii) Which device is used to measure electric current in a circuit?

- (a) Ammeter
- (b) Voltmeter
- (c) Rheostat
- (d) Potentiometer

(iv) The loudness of a sound is measured in

- (a) hertz
- (b) metre
- (c) second
- (d) decibel

(v) The loudness of sound mainly depends on its

- (a) frequency
- (b) wavelength
- (c) speed

- (d) amplitude
- (vi) If a current of 2 A flows through a resistance of 10 Ω , the potential difference is
- (a) 5 V
 - (b) 20 V
 - (c) 10 V
 - (d) 40 V
- (vii) One kilowatt is equal to
- (a) 100 watt
 - (b) 1000 watt
 - (c) 10 watt
 - (d) none of these
- (viii) A fuse wire should have
- (a) a low melting point
 - (b) high melting point
 - (c) very high melting point
 - (d) none of the above
- (ix) Sound waves are
- (a) transverse waves
 - (b) electromagnetic waves
 - (c) longitudinal waves
 - (d) light waves
- (x) The old colour convention for earth wire is
- (a) black
 - (b) green
 - (c) red
 - (d) yellow
- (xi) The unit of frequency is
- (a) second
 - (b) hertz
 - (c) joule
 - (d) watt
- (xii) When sound travels from air to water, which remains constant?
- (a) speed
 - (b) wavelength
 - (c) frequency
 - (d) amplitude
- (xiii) Assertion: Infrared radiations travel long distances through fog.
Reason: Infrared radiations undergo minimum scattering in atmosphere.
- (a) Both assertion and reason are true
 - (b) Both are false

- (c) Assertion true, reason false
- (d) Assertion false, reason true

(xiv) Fuse wire is an alloy of

- (a) tin-lead
- (b) copper-lead
- (c) tin-copper
- (d) lead-silver

(xv) It is an example of an air column or wind instruments.

- (a) Guitar
- (b) Flute
- (c) Sitar
- (d) Tabla

Question 2: **Write true or false for each statement**

[5]

- (a) When sound propagates in air, it does not carry energy with it.
- (b) In a longitudinal wave, compression and rarefaction are formed.
- (c) The distance from one compression to nearest rarefaction is called wavelength.
- (d) The frequency is measured in second.
- (e) The quality of a sound depends on the amplitude of wave.

SECTION B

Question 3

An electrical appliance is rated as 60 W-150 V.

- (a) What do you understand by this statement?
- (b) How much current will flow through the appliance when in use? [2]

Question 4

Assuming the electric consumption per day to be 12 kWh and the rate of electricity to be 6.25 per unit, find how much money is to be paid in a month of 30 days?

[3]

Question 5

- (a) A large drum produces louder sound than a small drum. Explain. [2]
- (b) State and explain any three characteristics of sound. [3]

Question 6

- (i) Obtain relationship between the time period and frequency. [2]
- (ii) Differentiate between longitudinal waves and transverse waves (any two points). [3]

Question 7

- (i) Differentiate between static electricity and current electricity. [2]
- (ii) An electric meter shows 150 units at the beginning of the month and

290 units at the end. If the rate is ₹2.50 per unit, calculate the total bill.

[3]

Question 8

(i) Why is a monotone speech boring and ineffective?

[2]

(ii) Why is earthing necessary in electrical appliances? Explain any three reasons.

[3]

Question 9 (CSBQ – Compulsory)

[5]

Read the given paragraphs and answer the following questions.

[5]

A current flowing in a closed loop is called an electric circuit. At homes, most electric circuits have a voltage of 220 volt. The amount of current (amp) that a circuit carries determines the number and power of electrical appliances connected to the circuit.

At homes and offices, the switchboards (used to power electric appliances) are connected in parallel electric circuits. This is done so that the current flowing through each switch is independent of the others and the same voltage flows through each one of them. The sockets present in the switchboard are used at homes to connect electrical appliances. The sockets and switches consist of three points one connected to a live wire, the other one to a neutral wire, and the topmost point connected to the earth wire.

(i) The potential difference maintained in domestic electric circuit is at

- (a) 220V
- (b) 220 kV
- (c) 132 kV
- (d) 220 kV

(ii) In a domestic electric circuit, the wire with red (or brown) insulation covering is called

- (a) live wire
- (b) neutral wire
- (c) earth wire
- (d) conducting wire

(iii) At homes, the switchboards are connected in parallel electric circuits because in parallel circuit.

- (i) each appliance gets equal voltage
- (ii) each appliance gets equal current
- (iii) the switch can be operated according to the will of the user
- (iv) switches connected in parallel are dependent on each other

- (a) (i) and (ii) are true
- (b) (i) and (iii) are true
- (c) (ii) and (iv) are true

(d) (i), (ii) and (iii) are true

(iv) The live wire in a domestic circuit is used to

- (a) Carry the electric current
- (b) complete the circuit
- (c) provide a path for current to flow into the earth
- (d) ensure proper fitting of the circuit

(v) If switch of an electric appliance is put off, it will disconnect

- (a) neutral wire
- (b) live wire
- (c) earth wire
- (d) both live and neutral wires

Silver grove school
Class - VIII
Chemistry

Instructions:

The answers to the questions must be written on the paper provided separately.

You will not be allowed to write in the first 15 minutes.

This question paper consists of Section A and Section B.

Attempt all questions from Section A. Section A consists of 15 MCQ type questions.

Attempt all questions from Section B.

Marks for the question or parts are given against each question.

SECTION – A

Question 1 choose the correct option from the following. (1×15= 15)

I. Different forms of the same element which differ only in their physical properties are called

a) Isomers b) Isotopes c) Homologues d) Isotopes

II. The source rock of diamond is

a) Kimberlite b) Sandstone c) Granite d) Basalt

III. When magnesium reacts with dilute hydrochloric acid, the following are formed.

(a) magnesium and hydrogen gas

(b) magnesium oxide and hydrogen gas

(c) magnesium and water

(d) magnesium chloride and hydrogen gas

IV. What is the other name of solid CO₂ ?

a) Ice b) Crystal c) Diamond d) Graphite

V. Which is used as a catalyst in haber bosch both process

(a).nickel (b).tin (c) . Lead (d) . Silicon

VI. The amorphous form of carbon is

(a) . Diamond (b) . Graphite (c) . Fullerene. (d) . Coal

VII. Which type of coal has highest percentage of carbon

(a).peat. (b). bituminous. (c) . Lignite (d) . anthracite

VIII. Which one of the following is a combustible substance?

(a).wood (b) . Marble. (C) . platinum (d) . Glass

IX. Which one of the following metals is less reactive than hydrogen?

a) Sodium b) Magnesium c) Zinc d) Tin

X. When a chemical species loses one or more electrons, it is said to have been

a) Oxidised b) Reduced c) Decomposed d) Displaced

XI. What is the other name of solid CO₂ ?

a) Ice b) Crystal c) Diamond d) Graphite

Assertion & Reason

a) Both Assertion and Reason are true and Reason is the correct explanation of the Assertion.

b) Both Assertion and Reason are true but Reason is not the correct explanation of the Assertion.

c) Assertion is true but Reason is false.

d) Assertion is false but Reason is true.

XII.Assertion: Carbon is a tetravalent element that can form large number of compounds.

Reason: Carbon has four electrons in the outermost shell.

XIII.**Assertion:** LPG is a combustible substance.

Reason: combustible substance catches fire easily.

XIV. **Assertion:**-Water does not expands when it freezes.

Reason :- The molecular structure of water change upon freezing causing it to occupy a larger volume.

XV. Purest form of water is

(a). Rain water (b). Sea water. (c) River water (d). Pond water .

Question 2. Complete the blank by using appropriate answer (2)

i.is formed by burning of carbon in insufficient supply of oxygen

ii. Potassium isreactive than calcium

iii. A molecule of hydrogen is represented as.....

iv. Zinc isreactive than iron.

Question 3. Match the following (2)

i).Nitric acid a).CH₄

ii).acetic acid. b).H₂SO₄

iii). Sulphuric acid. c). CH₃COOH

iv).methen. d). HNO₃

Question 4. Find the odd one out. (3)

i) Diamond, Graphite, Charcoal, Carbon dioxide

ii) Boiling, Freezing, Evaporation, Combustion

iii) Coal, Petroleum, Natural gas, Ethanol

Question 5. Complete the following reaction. (3)

(i).SO₃ + ?- H₂SO₄

(ii).Mg+ H₂SO₄ -----

(iii).Ca + 2H₂O-----

(iv). CuO + ?-----Cu. + H₂O

(v).Mg + Co₂-----2MgO+ C

(vi). Mg + O₂ -----

Section - B

Question 6. Answer in brief (any five). (1×5=5)

(i). Write the use of coal.

(ii). Write any two physical properties of water.

(iii).List any three uses of graphite.

(iv). Define the term Hygroscopic substance.

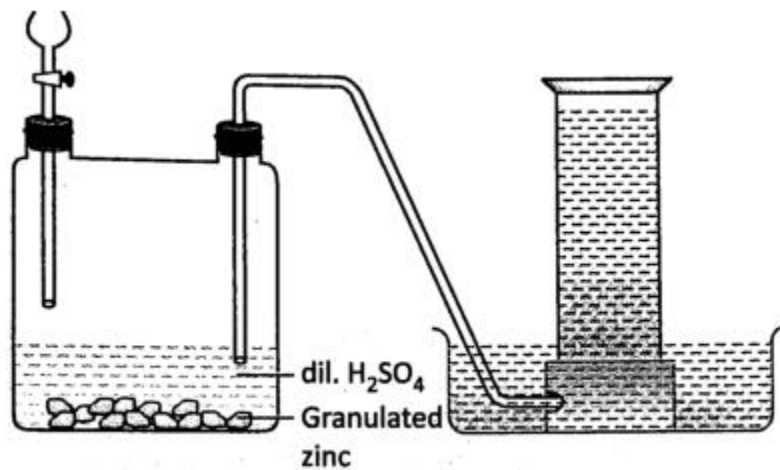
(v). What are the temporary hardness?

(vi).Why is hydrogen considered to be a clean fuel?

(vii).Give the two examples of hydrated salt

Question 7(A):- Give reason for the following (1×3=3)

- (i). wood charcoal is a better fuel than wood.
 - (ii). Graphite is used to make electrodes.
 - (iii). Hydrogen is used as fuel in space rockets.
- (B). Look at the given diagram and answer the following questions. (2)



- (i) The apparatus is set up for the preparation of a certain gas in the laboratory. Which gas is this?
- (ii). Why is the evolved gas not being collected in the gas jar?

**** Project work. (5)**

Sample paper Set B 8 history

Silver Grove School

CLASS- 8

SUBJECT: History/Civics

TIME: 2;00 Hrs.

M.M. 50

- Instruction: 1. Read all questions attentively.
2. It is compulsory to attempt all questions.
3. Marks for each question have been given.

Section - A

Tick {✓} the correct answer.

(.5×10=5)

1. The United Nations was established in:

- a) 1919
- b) 1945
- c) 1950
- d) 1960

2. Who led the revolt of 1857 in Kanpur?

- a) Bhakt khan
- b) Nana saheb
- c) Lakshmi Bai
- d) Kunwar singh

3. The east india company passed the General Service Enlistment Act in _____

- a) 1851
- b) 1855
- c) 1853
- d) 1856

4. WHO stands for _____

- a) World Health Organ
- b) World Health Organisation
- c) World Hurry Organisation
- d) World Holistic Organisation

5. A.O. Hume was associated with the _____

- a) Partition of Bengal
- b) Formation of Congress
- c) Morley-Minto Reform
- d) University Act

6. Who was the founder of the satya sodhak samaj ?

- a) Swami Dayanand Saraswati
- b) Jyotirao phule
- c) Ishwarchandra Vidyasagar
- d) Rajaram mohan Roy

7. From where did Netaji Subhash Chandra Bose proclaimed the formation of Azad Hind fauj?

- a) Singapore
- b) Andaman and Nicobar
- c) Japan
- d) Kohima

8. In _____ the British Passed the Rowlatt Act

- a) 1919
- b) 1990
- c) 1950
- d) 1947

9. Which of the following is the highest decision-making body of the UN?

- a) International Court of Justice
- b) Security Council
- c) General Assembly
- d) Secretariat

10. The UN strongly opposed the policy of apartheid in _____ by imposing sanctions.

- a) Japan
- b) Germany
- c) Italy
- d) South Africa

Fill in the blanks.

(5)

1. The rebels proclaimed _____ as the emperor of India.
2. _____ founded the Mohammedan Anglo-Oriental College at Aligarh in 1875.
3. The Swami Dayanand Saraswati slogan was _____.
4. The British shaken the _____ Economy.
5. Arms act passed in _____
6. Mahatma Gandhi introduced the policy of _____ against British rule.
7. The chairman of the Simon Commission was _____
8. The Quit India movement took place in the year _____
9. Satya Sodhak Samaj founded by _____
10. The Aligarh Movement was started by _____.

State whether the following statements are True or False.

(5)

1. The Indian soldiers were paid much less than as compared to their British counterparts. _____
2. Ishwar Chandra Vidyasagar, as principal of the Sanskrit College, allowed lower castes to join his college. _____
3. Swami Vivekanand attended the parliament of Religion held in New York in 1980. _____
4. The Congress was started in 1885. _____
5. A prominent leader of the Early Nationalist groups was S.N. Bannerjee. _____
6. The movement to abolish Sati was supported by Ishwar Chandra Vidyasagar. _____
7. The Quit India Movement was launched in 1946. _____
8. Swami Vivekanand parliament of religion held at New York 1980. _____
9. The revolt of 1857 did not involve the masses. _____

10. Namibia was the last to achieve independence with the help of trustee ship council.

Section - B

A .Define the term.

(4)

- 1.Swaraj. 2. Martial law 3.Radicals nationalist
4. The Indian national Army

B. Write Timeline of national congress (1)

C. Assertion- Reason type question 2 marks

In the questions given below, there are two statements marked as Assertion (A) and Reason (R).

Read the statements and choose the correct option.

- (a) Both Assertion (A) and Reason (R) are true and Reason (R) is the correct explanation of Assertion (A).
(b) Both Assertion (A) and Reason (R) are true but Reason (R) is not the correct explanation of Assertion (A).
(c) Assertion (A) is true but Reason (R) is false.
(d) Assertion (A) is false but Reason (R) is true.

Assertion (A): The United Nations was formed after the Second World War.

Reason (R): The main aim of the UN is to

Case Study Based Questions.

(3)

Read the passage given below and answer the questions that follow.

During the 19th century, Indian society was affected by many social evils such as sati, child marriage, caste discrimination, untouchability, and lack of education for women. Contact with Western education and ideas like liberty, equality, and rational thinking inspired many Indian reformers to work for social change.

Reformers like Raja Ram Mohan Roy, Ishwar Chandra Vidyasagar, Jyotiba Phule, Swami Vivekananda, and Sir Syed Ahmad Khan played an important role in removing social evils. Raja Ram Mohan Roy founded the Brahmo Samaj and strongly opposed sati. Ishwar Chandra Vidyasagar worked for widow remarriage and women's education. Jyotiba Phule raised his voice against caste discrimination and promoted education for the oppressed classes. Sir Syed Ahmad Khan started the Aligarh Movement to promote modern education among Muslims.

These religious reform movements helped in creating awareness, promoting equality, and preparing the ground for India's national awakening.

Questions

- A Name any two social evils mentioned in the passage.
B.Which reformer founded the Brahmo Samaj?
C What was the main aim of the Aligarh Movement?

Section – C

Answer the following question (Any Five)

(5x3=15)

1. Discuss the main aspects of the non cooperation movement
2. Differentiate between the methods of Early Nationalist and Radicals Nationalists.
3. What was the anti partition movement?
4. Write a short note on the Non- Cooperation Movement?

5. Explain non cooperation movement.
6. What were the social and educational reforms started by Sir Syed Ahmed Khan?
7. What is Simon Commission.

Project

(10)

Set b geo
Sample paper set A 8th geography
Silver Grove School

CLASS- 8
SUBJECT: GEOGRAPHY
TIME: 2 Hrs.
M.M. 50

Instruction:- Read all questions attentively
Its compulsory to attempt all questions.
Do not write irrelevant answer only what you can.

A. Choose the correct option
(3)

1. The Tropic of Cancer passes through:

- A. Middle of India
- B. Southern tip of India
- C. Northern boundary
- D. Western coast

2. The southernmost point of Indian mainland is:

- A. Indira Point
- B. Kanyakumari
- C. Lakshadweep
- D. Minicoy

3. Tropical evergreen forest are also called:

- (a) Monsoon forest (b) Evergreen forest
- (c) Tidal forest (d) Coniferous forest

4. Tidal forests are found in

- (a) Deltas (b) Deserts
- (c) Mountains (d) Sea coasts

5. Kanha National Park is situated in the state of

- (a) Assam (b) madhya pradesh
- (c) Rajasthan (d) Odisha

6. The main cause of rainfall in India is:

- A. Western Disturbances
- B. Monsoon Winds
- C. Cyclones

B. Fill up the blanks.

(4)

1. The main source of human resources is the _____.
2. Thorn forests are found in areas with _____ rainfall.
3. _____ and _____ trees are found in the tropical deciduous forests.
4. Developing countries have a _____ rural population.
5. India has a _____ type of climate.
6. _____ and _____ human resources are called skilled resources.

C. Write whether the following statements are True or False.

(3)

1. The Southwest Monsoon brings most of the rainfall in India. _____
2. Tropical evergreen forests are found in areas of heavy rainfall. _____
3. An enclosed part of the sea near the coast forming a lake known as Archipelago.
4. Loo is Hot, dry winds blowing over the northern plains of India.
5. The Standard Meridian of India is 82°30'E. _____
6. India shares land boundaries with eight countries. _____

D. Answer the questions in brief 50-60 words.

(2×5=10)

1. Name the neighbouring countries of India.
2. What is a break in the monsoon?
3. Explain the northern mountains.
4. Name and briefly describe the six major physical divisions of India.
5. Describe the main features of the Indian monsoon climate.

E. Answer any four questions in detail. Word limit (60 to 90)

(4 x 3=12)

1. Explain how the Northern Plains were formed. Why are they densely populated?
2. What is the difference between skilled and non skilled workers?
3. Give two reasons to explain why forests are important.
4. Distinguish between National Park and Wildlife Sanctuary.
5. Explain the concept of human capital formation.
6. Why does Tamil Nadu receive rainfall during the retreating monsoon season?

F. Give reason . Do any one (2)

- i) Chennai receives winter rainfall
- ii) the northern plains are densely populated.

G. On the given outline map of India mark and label the following:

(0.5x6=3)

1. The Tropic of Cancer. (0.5)
2. Standard Meridian of India (82°30'E). (0.5)

- 3.The Himalayan Mountain Range. (0.5)
- 4.The Thar Desert. (0.5)
- 5.Western Ghats. (0.5)
- 6.Sundarbans (Mangrove Forest area). (0.5)

H. Picture study.
(1*3=3)



- Q-1. Identify the physical features shown in the picture.
- Q-2. Name the type of mountains the Himalayas are.
- Q-3. Mention one importance of the Himalayas for India.

Project work. (10)

Silver Grove school
Practice Set B
2025-26
Subject -Sanskrit
Class VIII

Mm50

सामान्य-निर्देशाः -

सर्वे प्रश्नाः अनिवार्याः सन्ति ।

•प्रश्नानाम् उत्तराणि संस्कृतभाषायाम् एव लेखनीयानि ।

•उत्तराणि पृथक् उत्तरपुस्तिकायां क्रमानुसारं लेखनीयानि ।

•स्वच्छता स्पष्टता च स्यात् ।

1अलिखित श्लोकों को पूरा करें.

श्लोकपूर्ति कुरुत । 6

1. श्लोक पूरा कीजिए।

अशोकमुद्रा ----- च -----घ्निराष्ट्रगानम्।

व्याघ्रो----भवन्ति सप्त

राष्ट्रस्य -----भारतस्या॥

2 दत्तेन शब्देन रिक्तस्थानानि पूरवता 5

दिये गये शब्दों से रिक्त स्थानों की पूर्ति कीजिए।

जनकं प्रति पत्रम् लिखत

विमर्शः, जन्मदिवसः, जनकः, पितृभ्याम्, परिवारसदस्यैः, प्रणमामि, द्वादशदिनाङ्के, स्वस्थः,
प्रियसुतः,

परमादरणीयः-----

सादर-----

अहं अत्र..... अस्मि । परीक्षानन्तरं मार्चमासस्य.....

आगमिष्यामि। पञ्चदशदिनाङ्के ममअस्ति। गृहे एवसह आयोजयिष्यामि।

..... नमः तव

.....

3. निम्नलिखित शब्दानि अर्थ लिखित. 5

अशोकचक्रम्- अहोरात्रम्, दिनमानम्
,खात् ,शीघ्रतरम्, , मनः, मित्रम्, , भार्या, कः ,शत्रुः

4 अधोलिखितानां परस्परं मेलनं कुरुत।3.5

निम्नलिखित का परस्पर मेल कीजिए।

५ पितृभक्तः धेनूनाम्

2 अल्पे वयसि ददामि

3 दुर्बलानाम् अग्निविद्याम्

4 मृत्यवे. बालकः

5 स्वर्गसाधिकाम्. अध्यात्मज्ञानम्

6 तृतीयवररूपेण. त्रायते

7पुंनामनरकात्. आत्मज्ञानम्

5. पाठानुसारं रिक्तस्थानानि पूरयत।2.5

पाठ के अनुसार रिक्त स्थानों की पूर्ति कीजिए।

(क) गुरुतरा भूमेः।

(ख) खात्तथा।

(ग).....शीघ्रतरं वातात्।

(घ) बहुतरी तृणात्।

(ङ) प्रवसतो मित्रम्।

6उदाहरणानुसारं रिक्तस्थानानि पूरयत।3

- किंस्वित् + उच्चतरम्

किंस्वित् + शीघ्रतरम्

किंस्वित् + बहुतरम्

वातात् + चिन्ता

किंस्वित् + मित्रम्

साधुः + असाधुः

7धातु और प्रत्यय अलग करें।3

धातु प्रत्यये च पृथक् कुरुत।

द्रष्टुम्

तर्तुम्

हर्तुम्

पठितुम्

कर्तुम्

दातुम्

8 शब्दरूपाणि लिखत- (मुनि,नदी) ईकारान्त (स्त्रीलिङ्ग) 5

....

9 पाठानुसारम् उत्तरं लिखत।6

पाठानुसारम् एकपदेन उत्तरं लिखत।

(क) आधुनिकाः छात्राः किं कुर्वन्ति?

(ख) संस्कृते केवलं किं भवति ?

(ग) पठने विद्यार्थिनः किम् अनुभवन्ति?

(घ) पितुः आदेशं परिपाल्य नचिकेता कुत्र अगच्छत्?

(ङ) बालकः कस्य प्रतीक्षाम् अकरोत्?

(च) नचिकेताः कीदृशः बालकः आसीत्?

10 समानार्थकानां परस्परं मेलनं कुरुत।2.5

समानार्थकों का परस्पर मेल कीजिए।

1. देशस्य. पताका:

2. प्रणेता. प्रख्यातः

3. प्रसिद्धः. जीवानाम्

4. ध्वजः. राष्ट्रस्य

5. देशस्य. पताका:

6. सत्त्वानाम् लेखकः

10 चित्राणि दृष्ट्वा रिक्तस्थानानि पूरयत।10

मम परिचयः



