



Silver Grove School

Sample paper set – B (2025-26)
CLASS- 4

TIME: 2 Hrs.

M.M.

Name :

Roll no :

Instructions:

1. Read all questions attentively.
2. It is compulsory to attempt all questions.
3. Marks for each question have been given.

ENGLISH -I

Section -A

Q1. Choose the correct option for each statement.

1. Mr Goyal was invited as the chief guest at the ____ conclave.
A. Writers B. Writer's C. Writers'
2. Tick the sentence that is correctly punctuated.
A. This is Neha's house.
B. This is Neha house.
C. This is; Neha house.
3. A/An _____ is put before a conjunction.
A. Comma B. Semicolon C. apostrophe
4. The word _____ has a correct suffix.
A. lighting B. lighter C. lights
5. The correct prefix for mature will be _____.
A. immature B. innature C. dismature
6. The prefix _____ is used to form the comparative degree of the adjective when added to a word.
A. dis B. in C. im

2. Give the Antonyms of the following words.

- | | | |
|----------|----------|-------------|
| A. Apart | B. Grief | C. Harmful |
| D. Broad | E. Urban | F. Exterior |

Q3. Give the Synonyms of the following words.

- | | | |
|--------------|---------------|----------------|
| A. Extensive | B. Enchanting | C. Magnificent |
|--------------|---------------|----------------|

D. Gossiped

E. Cordial

F. Gingantic

Q4. Give one word for the given phrases.

- A. One who leads a group
- B. A person who looks on the bright side of things.
- C. A list of books
- D. A life story of person written by himself.
- E. One who can't read or write.

Q5. Fill the correct homophones words from the given brackets.

- a. At what time will you the dentist today? (meat/meet)
- b. My friend fell and broke his (heal/heel)
- C. Why do you look so ? Have you not been eating? (weak/week)
- d. At my cousins plan to watch a horror movie. (night/knight)

Q6. Match the homophones correctly.

Column A

a. wait

b. piece

c. pain

d. brake

e. ate

☐☐☐☐☐

Column B

i. pane

ii. eight

iii. break

iv. weight

v. peace

Section -B

Q. 7. Read the sentences carefully and apply apostrophe in them.

- a. Tinas sister is a doctor.
- b. All the 1s move to the right and all the 2s move to the left.
- C. Cant you try it out once more?
- d. My moms face was glowing with the happiness within her heart.
- e. It was nobodys fault that the tap broke.

Q8. Use the words given in the brackets with a suitable prefix to fill in the blanks.

- A. Rita was ____ to visit her friend as she had a lot of homework to do. (able)
- B. Abhay had spelled a lot of words ____ in his test. (correctly)
- C. My mother was ____ as we had to cancel our plans. (happy)
- D. Beena ____ her classmates, she just does not talk to them. (like)
- E. What an ____ encounter you' ve had! (believable)

Q9. Rewrite the sentences using the antonym of the underlined words.

- A. He has shown himself to be qualified for this position
- B. He is capable of winning the election.
- C. She has healthy food every day.
- D. This medicine is safe for animals.

Q10. Write a short paragraph on the topic.

Influence of internet on children

Or

My best friend

Q11. Look at the picture carefully and write few lines on it.



Q12. Read the passage below and answer the following questions.

Aman loved visiting his grandmother's house during the holidays. Her house was near a small village surrounded by green fields and tall trees. Every morning, Aman woke up early to hear the birds singing. His grandmother gave him warm milk and fresh fruits.

One day, Aman saw a little puppy near the gate. It looked hungry and weak. Aman felt sorry for it. He brought some food and water for the puppy. Slowly, the puppy became healthy and playful. Aman named it Bruno. Bruno followed Aman everywhere and became his best friend. Aman learned that kindness and care can make a big difference in someone's life.

Answer the following questions:-

1. Where was Aman's grandmother's house located?
2. What did Aman hear every morning?
3. What did Aman see near the gate one day?
4. What name did Aman give to the puppy?
5. What lesson did Aman learn from this experience?

Q13. . You have to attend a family function at your granny's house. Write an application to the principal, requesting him/her to grant you leave for four days.

Or

You are Varun Sharma, studying at ABC School, Lucknow. You are suffering from viral fever and your family doctor has advised you to take complete rest for two days. Write an application to the principal of your school, requesting him to grant you two days leave.

Q.14 Internal Assessment

ENGLISH-II

Section – A

1. Choose the correct option:

A. The scientist instructed Migma to press the button on his ___ if he sensed any danger.

- a) Life jacket b) Watch c) Flashlight

B. The poet wishes to be a ___.

- a) King b) Queen c) Prince

C. The poet would do anything and tell the ___ that he is the king.

- a) Soldiers b) Aunts c) Sisters

D. Sudha lived with her grandmother in ___.

- a) Karnataka b) North India c) A neighbouring village

E. At the age of sixty-two, Avva wanted to learn the ____.

- a) Alphabet b) Novel c) Maths

2. Fill in the blanks with the correct options given in brackets:

- a. The residents in the area of Jenta Hills had grown used to the sound, but it still ____ them. (puzzled / attracted)
- b. Soon, Migma reached an old and abandoned train _____. (platform / station)
- c. Migma stood in the huge room for a while and decided to leave _____. (quietly / happily)
- d. Suddenly, the light of his ____ started blinking. (wristwatch / train)
- e. Migma has stumbled upon a _____ about (secret / stone) that no one in the town knows.

3. Write 'T' if the statement is true and 'F' if the statement is false:

- a. If the speaker were the King of Spain, he would take his hat off in the sun. []
- b. The speaker wishes to be the king of many countries. []
- c. The speaker does not desire to rule over Timbuctoo. []
- d. Marbles is a game of eye-hand coordination. []
- e. Kabaddi is also known as Satodiya. []

4. Match the words in Column A with the correct parts in Column B to make meaningful sentences:

Column A

Column B

- | | |
|---------------------------|-----------------------|
| a) Migma's bike | With strange machines |
| b) The train station | Was old and abandoned |
| c) The room was filled | Hit the train track |
| d) Tourists were watching | The pods of dolphins |

Section - B

5. Write the meanings of the given words:

- a. Obstinate b. Mischievous c. Advice d. Treasure e. Incredible

6. Make sentences using the given words:

- a. Scientist b. King c. Soldiers d. Lovely

7. Answer the following questions:

- a. What did Migma decide to do one day?
- b. How was Tramine different from other trains?
- c. What kind of mindset does the poet have, according to the poem?
- d. Who used to read the story of Karavveera and why?
- e. Where did Sudha go with her family?
- f. From where did the children get flat stones for the game of Lagori?

8. Read the extract and answer the following question

Vani: We call it *Pittu*. Some call it *Satodiya* or *Sitoliya*. When we were in Kerala, we used to play it with a ball made of coconut leaves. I am always ready for this game. Roshni, have you played it before?

Roshni: No, I have not.

- a. What are the other names of *Pittu*?
- b. How is this game played in Kerala?
- c. Who has not played this game before?

9. Internal assessment

Hindi – I

खंड क

प्रश्न 1 दिए गए वाक्यों में आई क्रियाओं को पहचानकर उनके सामने सकर्मक या अकर्मक लिखिए-(२.५)

(क) नवीन पतंग उड़ाता है।

(ख) सोनू पुस्तक पढ़ती है।

(ग) माँ कहानी सुनाती है।

(घ) बच्चे क्रिकेट खेलते हैं।

प्रश्न 2 दिए गए वाक्यों में आई क्रियाओं के काल लिखिए-(२.५)

- (क) मोनिका गीत गाएगी।
- (ख) अजय फल तोड़ रहा था।
- (ग) दीपू ने पुस्तक पढ़ ली।
- (घ) सोनाली अमरूद खा रही है।
- (ङ) बच्चे शोर मचाएंगे।

प्रश्न 3. दिए गए वाक्यों को निर्देशानुसार बदलिए-(२)

- (क) वरुण तबला बजाता है।
- (ख) निधि कविता सुनाएगी।
- (ग) चाची अंगूर खरीद रही थीं।
- (घ) शेर ने जोर से दहाड़ लगाई।

प्रश्न 4 दिए गए विराम चिन्हों को पहचान कर उनके नाम लिखिए। (२)

(,) (!) (|) (?)

प्रश्न 5 दिए गए वाक्यों को शुद्ध करके पुनः लिखिए। (२.५)

- (क) उसने कक्षा में प्रथम आया है।
- (ख) मैंने को स्कूल नहीं जाना।
- (ग) बाहर अनेकों लोग खड़े हैं।
- (घ) चूहे ने मेरा कमीज कुतर दिया।
- (ङ) यह कौन विषय की किताब है?

प्रश्न 6 दिए गए अनेक शब्दों के लिए एक शब्द लिखिए। (२)

- (क) जहाँ पुस्तक रखी जाती हैं।
- (ख) जो रोगी की चिकित्सा करता है।
- (ग) दूसरों का उपकार करने वाला।
- (घ) जो पढ़ा लिखा ना हो।

प्रश्न 7 दिए गए शब्दों के विलोम शब्द लिखिए।(२)

लाभ, पाप, स्वामी, हिंसा, प्रशंसा, न्याय, गुण, अनुकूल

प्रश्न 8 दिए गए शब्दों के पर्यायवाची शब्द लिखिए।(२)

जगत, साँप ,रात ,बादल

प्रश्न 9 दिए गए चित्रों को देखकर उन पर आधारित सही मुहावरे लिखकर वाक्य प्रयोग कीजिए। (३)



प्रश्न 10 दिए गए वाक्यों में विराम चिन्हों का उचित प्रयोग कीजिए। (२.५)

- (क) पलक स्वामी माही और राजू घूमने गए हैं
- (ख) अरे तुम्हारे जूते कितने गंदे हैं
- (ग) वाह क्या सुगंध है
- (घ) आह मेरे पेट में दर्द हो रहा है
- (ङ) क्या तुम मेरे साथ सर्कस देखने चलोगे


खंड ख

प्रश्न 11 हिंदी के महीना के नाम लिखिए। (४)

प्रश्न 12 40 से 50 तक की हिंदी गिनती लिखिए।(४)

प्रश्न 13 अपने दादाजी के स्वास्थ्य के बारे में जानने हेतु पत्र लिखिए। (४)

प्रश्न 14 चित्र को देखकर उसका वर्णन कीजिए। (२)



प्रश्न 15 अपठित गद्यांश पढ़कर पूछे गए प्रश्नों के उत्तर दीजिए। (५)

एक जंगल में एक बरगद का पेड़ था। उसे पेड़ पर एक कौवा और एक कोयल रहते थे। कौवे की बोली कर्कश और वह सबसे लड़ता भी रहता था, इसलिए जंगल में उसे कोई पसंद नहीं करता था। जबकि कोयल की बोली मीठी थी और वह मीठी बोली से सबका मन मोह लेती थी। इसलिए वह जंगल में सबको प्रिय थी। कोयल और कौवे का स्वभाव एक दूसरे से बिल्कुल अलग था, लेकिन वे दोनों गहरे मित्र थे और हमेशा साथ रहते थे। जंगल के पशु पक्षी उनकी मित्रता की प्रशंसा करते थे।

- (क) जंगल में कौन सा पेड़ था?
- (ख) कौवे की बोली कैसी थी?
- (ग) कोयल सबको प्रिया क्यों थी?
- (घ) पशु पक्षी किसकी प्रशंसा करते थे?
- (ङ) कौन गहरा मित्र था?

प्रश्न 16 दिए गए प्रश्नों में से किन्हीं तीन प्रश्नों के उत्तर दीजिए। (३)

- (क) क्रिया के मूल रूप को क्या कहते हैं?
- (ख) काल किसे कहते हैं?
- (ग) भूतकाल और भविष्य काल में उदाहरण सहित अंतर स्पष्ट कीजिए।
- (घ) हिंदी भाषा के कुछ प्रमुख विराम चिन्हों के नाम लिखिए?
- (ङ) विराम चिन्ह किसे कहते हैं?

प्रश्न 17 आंतरिक मूल्यांकन (५)

Hindi-II

प्रश्न 1 उचित विकल्प पर सही का चिन्ह लगाइए-

(4)

(1) गिलहरी अपना घर कहाँ बनती है?

1. टहनियों पर 2 पेड़ पर 3 कमरे में

(2) गिलहरी किसके लिए घर बना रही है?

(1) बच्चों के लिए 2. चिड़िया के लिए 3 दोस्त के लिए

(3) मिश्रा मैडम ने बच्चों को कहाँ बुलाया ?

1 ऑडिटोरियम 2) विद्यालय में 3 कक्षा में

(4) अंशु को किसके बारे में कुछ नहीं पता था?

(1) महात्मा गांधी के बारे में 2 कस्तूरबा गांधी के बारे में (3) दोनों के बारे में

(5) अर्जुन और उसकी बहन मिलकर क्या बना रहे थे?

(1) झंडा (11) गुड़ और चना (ला) भारत का नक्शा

(6) नेहरू जी पहाड़ों पर घूमते हुए कहाँ जा पहुँचे ?

(1) लद्दाख (2) श्रीनगर 3 अमरनाथ

(7) भाई-बहन ने झंडा किस पर बनाया 2

(1) कागज़ पर (11) परदे पर सारे 3 चुनी पर.

(8) प्राचीन काल में राजकुमारी अपने भाई राजकुमार को सुद्ध

में कैसे भेजती थी ?

(1) आरती करके (1) रोली चंदन करके (1) दोनों-

प्रश्न 2 निम्नलिखित शब्दों के अर्थ लिखिए (5)

तादाद, नदारत, रपटिला, आत्मविश्वास, कमतर, ऑडिटोरियम, इंटरवल, किलक, कोटर, रत्न

प्रश्न 3. सही वाक्य पर (✓) तथा गलत वाक्य पर गलत (X) का निशान लगाइए - (5)

1. बहन ने भाई को तिलक लगाकर विदा किया।
2. तेनालीराम और उसके बेटे ने मिलकर कुएं से खेत को सींचा।
3. तेनालीराम ने संदूक में हीरे जवाहरात भरे थे।
4. तेनालीराम ने संदूक में कंकड़-पत्थर भर रहते थे।
5. अंशु को कस्तूरबा गांधी के बारे में बोलने से झिझक हो रही थी।
6. अंशू एक होशियार लड़की थी।
7. अंशू सबके सामने बोलने से डरती थी।
8. सिपाहियों के डराने धमकाने से अर्जुन डरकर भाग गया।
9. अंशू ने दीपेश की बात मान ली।
10. बहन ने मां की साड़ी से झंडा बनाया।

2

प्रश्न 4 दिए गए वाक्यों को किसने, किसे कहा? (3)

- 1." हम लोगों ने सोचा की चढ़ाई खत्म होने से हमारी मुश्किलें भी खत्म हो गई हैं ।"
- 2." आज इन चोरों को कुछ ठीक ढंग से मेहनत करने का अवसर मिलेगा।"
- 3" तुम्हारी चतुराई का कोई जवाब नहीं है ।"
- 4" कौन है यह वायसराय?"
- 5" बड़ा आया वायसराय !क्यों ना निकले झंडे का जुलूस ?"
- 6" तब तो हम जरूर जुलूस निकालेंगे ।"

प्रश्न 5 कोष्ठक में दिए गए शब्दों में से छाटकर खाली स्थान को भरिए(5)

[झिझक ,अंग्रेजों, बापू, इंटरवल ,विजयनगर, गांधी जयंती, मटायान, कस्तूरबा , लाइब्रेरी, झंडा]

1. घंटे में अपना _____ बहा कर कुएं से पानी बाहर निकलते रहे।
2. महात्मा गांधी को पूरा देश _____ के नाम से जानता है।
3. हमारा देश _____ का गुलाम जो है।
4. विद्यालय में _____ पर बहुत सारे कार्यक्रम होने जा रहे थे ।
5. अंशु को सबके सामने _____ महसूस होती थी।
6. अंशु को _____ का रोल मिला था।
7. अंशु ने _____ में जाकर पुस्तकें पढ़ी।
8. भाई बहन दोनों _____ बनाने में जुट गए।
9. मेरे खयाल से वह _____ कहलाती थी ।
10. तुम्हारी चतुराई का कोई जवाब _____ है तेनालीराम।

प्रश्न 6 निम्नलिखित पाठ्यांश को पढ़कर नीचे पूछे गए प्रश्नों के उत्तर दीजिए । (4)

मनु आगरा के एक छोटे से नगर में रहती है। उसकी माता जी जेवर की दुकान में काम करती हैं और पिताजी एक टैक्सी चालक है। उसके माता-पिता चाहते हैं कि मनु कंप्यूटर के बारे में सीखें। उनको इस बात की खुशी है कि उसे कंप्यूटर चलाना और इस्तेमाल करना अच्छा लगता है। मनु कंप्यूटर के 3 हमेशा समय निकाल लेती है। उसे कंप्यूटर से मेल भेजने के अलावा कई और चीजों की भी जानकारी है। वह इस पर स्कूल के प्रोजेक्ट भी बनती है

प्रश्न 1 मनु कहां रहती है?

प्रश्न 2 मनु को क्या करना पसंद था?

प्रश्न 3 मनु के माता-पिता क्या चाहते थे?

प्रश्न 4 मनु कंप्यूटर पर क्या काम करती थी?

प्रश्न 7 निम्नलिखित प्रश्नों के उत्तर 20 30 शब्दों में दीजिए (6)

प्रश्न 1 तेनालीराम ने संदूक में क्या भरत ?

प्रश्न 2 रास्ता दिखाने के लिए नेहरू जी के साथ कौन था?

प्रश्न 3 नेहरू जी किसके साथ घूमते हुए लद्दाख पहुंच गए ?

प्रश्न 4 गिलहरी किसके लिए घर बना रही है?

प्रश्न 5 रोहित कहाँ जा रहा था ?

प्रश्न 6 अर्जुन के घर में कौन-कौन था?

प्रश्न 8 निम्नलिखित प्रश्नों में से किन्हीं तीन प्रश्नों के उत्तर 50-60 शब्दों में दीजिए (6)

प्रश्न 1 नेहरू जी को क्या धोखा हो गया था?

प्रश्न 2 नेहरू जी के साथ क्या घटना घटी?

प्रश्न 3 विशाल हम सरोवर का दृश्य कैसा था ?

प्रश्न 4 जुलूस में जाने से पहले बहन ने भाई को कैसे विदा किया?

प्रश्न 5 नेहरू जी अपने साथ यात्रा पर क्या-क्या लेकर गए?

प्रश्न 9 अभ्यासार्थ (6)

1 निम्नलिखित शब्दों के विलोम शब्द लिखिए

हरियाली, जल, एक, बच्चे

2 निम्नलिखित शब्दों के दो- दो शब्द पर्यायवाची लिखिए

बेटा ,सफल, सुबह ,घर

3 निम्नलिखित शब्दों के वाक्य प्रयोग कीजिए

कामयाब, आलय

प्रश्न 10 विचार मंथन प्रश्न (1)

बड़ों से बातें करते समय हमें किन-किन बातों का ध्यान रखना चाहिए?

11 आंतरिक मूल्यांकन (5)

MATHS

Section – A

Q1. Tick the correct option for the following:-

4

- a. _____ is a method of distributing a group of things into equal parts.
 i. Division. ii. Multiplication. iii. Addition
- b. The length of time that an event or an activity takes to complete is called the _____.
 i. Duration. ii. Event. iii. Time
- c. Apples from 4 baskets are rearranged by moving them from one basket to another until all the baskets contain the same number of apples. How many apples will be there in each basket after rearrangement ?



- i. 4 apples ii. 10 apples iii. 8 apples
- d. The mug can hold _____ more mL of water than the cup.



- i. 1000. ii. 1250. iii. 1200
- e. Which of the following option is incorrect
 i. 12 L 50 mL = 12500 mL
 ii. 2 L 75 mL = 2075 mL
 iii. 3 L 50 mL = 3050 mL
- f. Sonali bought the following items



How much money did she spend?

- i. ₹ 27. ii. ₹ 17. iii. ₹ 15
- g. A fractional part of the set of stars is shaded. Which of the following sets of circles represents the same fraction?




- a. b.
- c.

- h. Half of 10 litre is _____.


- i. 5 l ii. 50 ml iii. 50 l

Q2. Fill in the blanks for the following:-

4

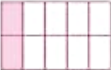



- a. The symbol of rupee is _____.
- b. ₹654 and 70 paise + ₹ 87 and 54 paise = _____.
- c. 54 l and 40 ml – 49 l and 70 ml = _____.
- d. $\frac{15}{24} - \frac{10}{24} =$ _____.
- e. The total cost of  is ₹ _____.



- f.  ($<$, $>$ or $=$)
- g. A movie starts at 7:30 p.m. on Sunday. It runs for 2 hours 15 minutes. Then the movie will end at _____.
- h. 5920 ml = _____ l and _____ ml.

Q4. Match the following:-



4

- a. 9 l.
- b. 540 ml + 40 ml.
- c. ₹ 35.
- d. $\frac{2}{4} - \frac{1}{4}$
- e. 
- f. 
- g. 50 minutes.
- h. $99 \div 9$
- i. 11
- ii. $\frac{2}{10}$
- iii. 580 ml
- iv. ₹1000
- v. 
- vi. 
- vii. 9000 ml
- viii. $\frac{1}{4}$







Q3. State whether the following statements are true or false:-

4

- a. $\frac{12}{13}$, $\frac{44}{15}$, $\frac{100}{15}$ are like fractions.
- b. The double of 5 litres = 11 litres.
- c. $\frac{7}{23}$, $\frac{7}{10}$, $\frac{3}{11}$ are unlike fractions.
- d. A fraction is a part of a whole.
- e. The duration of  is 21 minutes.
- f. ₹1000 = 100 paise.
- g.  = ₹5 + ₹100 + ₹2 + ₹100 + ₹10.

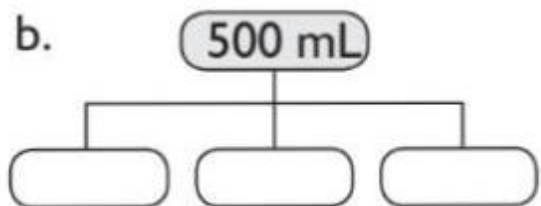
h. $6\text{ l } 500\text{ ml} = 6005\text{ ml}$.

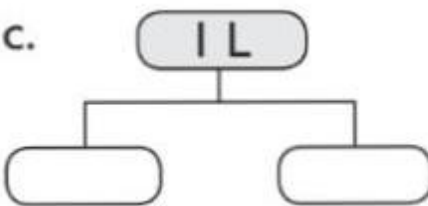
Q5. Look at the start and end time given on the clocks and find the duration of each activity:- 1

Event/Activity	Start Time	End Time	Duration
reading newspaper	 morning	 morning	<input type="text"/>
eating lunch	 afternoon	 afternoon	<input type="text"/>

Q6. Fill in the boxes using 500 ml, 200 ml, 100 ml and 50 ml to get the total values written at the top :-

1

b. 

c. 

Q7. Answer the following:- 1

- a. How many notes of ₹ 100 are there in ₹ 2500 ? _____
- b. How many notes of ₹ 150 are there in ₹ 150 ? _____

Q8. Ms Khurana has ₹ 7000 for shopping. Calculate the total cost of each item and the total amount she has spent on the shopping. Also calculate the balance:- 2.5

Item	Number of Item	Cost per Item (₹)	Total Cost (₹)
shirt	2	450	
jeans	2	900	
saree	1	1200	
pair of shoes	2	450	
blazer	2	650	
Total Cost			
Balance			

Q9. Tick (✓) the fractions that are equivalent to $\frac{1}{2}$. Also, write the fractions :- 1

a. 

b. 

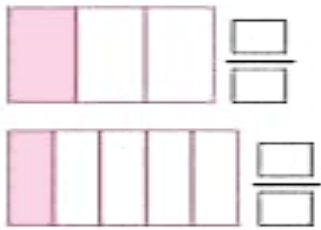
Q10. Compare the following using signs, > , < or = :- 1

e.  e. $\frac{4}{5}$ $\frac{3}{5}$

f.  f. $\frac{2}{10}$ $\frac{1}{10}$

Q11. Write the fraction for the shaded parts:-

1



Q12. Write PF for proper fraction, IF for improper fraction and MF for mixed fraction:-

1

a. $\frac{4}{5}$

b. $\frac{17}{2}$

c. $7\frac{1}{4}$

d. $\frac{1}{9}$

Q13. Fill in the table with the number of equal groups and value in each group:-

1

Total	Number of Equal Groups	Value in Each Group
16	2	
42		6
63		9
64	8	

Q14. Ranjeeth joined a guitar class and he practiced daily at home.

0.5



- Show 6:30 as start time on the given clock.
- Show 7:10 as end time on the given clock.
- How long Ranjeeth practiced everyday?

Section :- B

Q15. Divide the following using repeated subtraction:-

1

a. $65 \div 13$

b. $18 \div 6$

Q16. Divide the following using the short division method:-**1**

a. $505 \div 5$

b. $488 \div 8$

Q17. Divide the following using the long division method:-**1**

a. $876 \div 4$

b. $189 \div 9$

Q18. Estimate the following numbers to the nearest tens and solve the following:-**1**

a. $54 + 54$

b. $87 - 57$

Q19. Choose a 3×3 square on the given calendar. Apply a pattern on it and show its results related to sum of rows, sum of columns and sum of diagonals:-**1**

JULY 2023						
M	T	W	T	F	S	S
					1	2
3	4	5	6	7	8	9
10	11	12	13	14	15	16
17	18	19	20	21	22	23
24	25	26	27	28	29	30
31						

Q20. Convert the following:-**4**

a. 7 L 435 mL into mL

b. 6436 mL into L.

c. ₹ 60 into paise.

d. 2000 paise into rupees

Q21. Solve the following:-**2**

a. Add : 34 L 650 mL and 36 L and 768 mL

b. Subtract : ₹ 80 and 49 paise from ₹ 98 and 43 paise

c. Add : $\frac{3}{4}$ and $\frac{5}{4}$

d. Multiply : ₹ 57 by 7

Q22. Arrange the following as instructed:-**1**

a. $\frac{43}{7}, \frac{23}{7}, \frac{14}{7}$ (Descending order)

b. $\frac{3}{8}, \frac{5}{8}, \frac{6}{8}$ (Descending order)

Q23. Write the following as mixed fractions:-**1**

a. $4 \text{ and } 2/4 =$

b. $6 \text{ and } 1/2 =$

Q24. Compare the fractions using the cross multiplication method:-

1

a. $\frac{18}{9}$ and $\frac{21}{6}$

b. $\frac{13}{12}$ and $\frac{12}{13}$

Q25. Word problem (attempt any two):-

2

a. A hospital ordered 876 new blankets. The blankets are delivered in 4 equal shipments. How many blankets were there in each shipment ?

b. Find the number of days between Gandhi jayanti and Christmas Day.

c. Saurabh's birthday is on 4th April and Prabhat's birthday is on 9th November. How many days are there between their birthdays?

d. A pencil costs ₹ 7. Find the amount Amit has to pay for 20 such pencils.

e. A farmer packs 9872 apples equally in boxes. How many apples does he pack in 8 boxes?

Q26. Mental Math:-

1

a. The time is 3:40 p.m. what will the time be after half an hour?

- i. 4:10 p.m. b. 4:10 a.m. c. 4:10

b.



Which of the following shows the total value of above coins?



Q27. Internal Assessment.

SCIENCE

Section -A

Q. 1. Fill up the blanks.

1. All sound are not-----to human ears.

2. Sound travels -----in thicker medium.
3. Light is a form of -----
4. Sound is caused due to -----in the particles of matter.
5. The -----is a domed shaped muscular wall below the lungs.
6. Sound waves travel from ear to -----

Q.2 State whether the following statements are true or false.

1. Use of fueal such as cng and lpg highly reduces the amount of pollutants released in the air
2. Sound cantravel through a vacuum but not through water.
3. All type of teeth in our mouth have the same function.
4. A torch give out a straight beam of light
5. The brain interpret the sound wave that reach it from the ear
6. All living things take in carbon dioxide during respiration and give out oxygen.

Q.5 Write meaning of given words. -

1. combustion. 2. Emission 3.harmonious 4.salivary gland

Q.6 Complete the following table.-

Name of the Teeth	Number of Teeth	Function of the Teeth
Incisors	_____	_____
Canines	_____	_____
Premolars	_____	_____
Molars	_____	_____

Section -B

Q.7 Diagram based Questions.

1. Draw the diagram of how sound is produce?

Q.8 Define the following terms.

1. organ system 2. echo

Q.9 Answer the following questions in brief.

1. what is air pollution ?
2. one can predict if a train is approaching a station even when it is out of sight . how?
- 3 how does a loud sound affect our ears.
- 4.what is the colour of your shadow if you are wearing a blue dress?
- 5 why do we see a rainbow in the sky?

Q.10 Answer the following questions in detail.(Do any three) –

- 1 write the two main function of blood in human body?
2. how is sun light converted in to electrical energy?
3. how can we control air pollution?
4. how is the balance between oxygen and carbon dioxide maintained in the atmosphere?
- 5 how is arteries different from veins?

Q.11 Differentiate between

1. natural and artificial sources of light

Q.12 Justify your answer

1. how can you differentiate between a shadow formed when a n object is closed to the source of light from a shadow formed when the object is far away from the source of light?

SOCIAL STUDIES

Q.1.Tick the correct option.

A. Mahatma Gandhi was born on _____ in 1869 ,at Porbandar ,Gujarat .

- (i) 2 September (ii)2 October (iii)2 November

B.Muslims celebrate _____ at the end of the month of Ramzan.

- (i) Eid al-Fitr (ii)Eid ul zuha (iii)Easter

C.) Hawa Mahal is situated in -----

- (i) Delhi (ii)Mumbai (iii)Jaipur

D.----- is bright flash of light.

1. Thunder. 2.Snow. 3.Lightening

F.-----is the head of municipal committee.

a. Chairperson. B. Governor. C. Sarpanch

G. -----is the head of the municipal corporation.

a. Pesident. b.Chairperson. c.Mysore

H. The Nizamuddin Tom is in-----.

a.Mumbai. b. Bengaluru c.Delhi

I- -----is a bright flash of light.

a.Thunder. b.Snow. c.Lightening

Q.2. Match the following with festival to their Religon.

Column (A)	Column (B)
a. Eid -ul -fitr	i .Christians
b. Baisakhi	ii .Parsis
c. Christmas	iii .Sikhs
d.Navroz	iv.Muslims

Q 3. Fill in the blanks.

1.Moment of air cases the----- to blow.

2. Rain is measured in-----.

3.Pongal is celebrated in the month of_____.

4.) Easter is celebrated by the_____.

5. The panchayat consist of -----members called the punchas.

6. The governor is appointed by the -----of the country.

7. factors such as-----,----- and----- affect weather.

8 .In the centre of the Meenakshi temple, there is a pond called-----.

9. The constitution of India came into force on-----.

10. The group of people who help the prime minister to run the countries called the-----

Q.4..In the given table four festivals are maintained write the place/ state where they are celebrated.

a Onam _____ b.Makar Sankranti _____ d.Pongal _____
e.Durga----- f.Puja_____

Q.5. Correct the statements given below and rewrite them.

- a. Meenakshi temple is in Delhi.
- b. Junagarh fort is one of the seven wonders of the world.
- c. The Prime minister is the head of state government.
- d. Jama masjid was built by Mughal King Akbar in the 17th century.
- e. Junagarh fort is one of the seven wonders of the world.

Section B

Q 6. Answer the following question is 30 -40 words

- 1. Name the three parts of state government.
- 2. What are dewdrops?
- 3. What is special about the pillars of Meenakshi temple?
- 4.What are the different forms of precipitation?
- 5. Which Hindu festival celebrates love and duty between brother and sister?

Q.7. Answer the following question in 50-60 words.

- 1. Why do we celebrate festivals give two reasons.
- 2. Why do we celebrate 26 January?
- 3. How is snow formed?
- 4. Briefly explain any four religious festival celebrated in India.
- 5. Why do we celebrate festivals? Give two reasons.

Q.8. Define the following terms.

- 1. Climate 2. Frost 3. Makar Sankranti 4. Land breeze 5. Frost

Q.9. Draw and colour the water cycle and label it.

COMPUTER

Section -A

Q.1 Choose the correct option

1. Which of the following contains the Cut, Copy, and Paste commands in computer folder window?

- a. Organize
- b. Open
- c. Share with

2. The shortcut key to permanently delete a file/folder is

- a. Shift+Enter
- b. Shift+Delete
- c. Ctrl+Delete

3. Tick the incorrect statement

- a. Recycle bin holds all the deleted files and folders
- b. Always enter the computer lab without teacher
- c. Copying others work and presenting it as our own is a punishable act

4. Which is the default font in MS word 2010.

- a. Times new roman
- b. Arial
- c. Calibri

Q.2 Write T for true statement and F for false one

- 1. Underline command places a line beneath the text.
- 2. Deleted files or folders are shifted to the Recycle Bin.
- 3. A folder cannot be renamed.
- 4. Once deleted, a file/folder cannot be restored. **Q.3 Fill up the blanks.**

- 1. Recycle Bin folder can be found on the _____.
- 2. _____ is a popular search engine.
- 3. _____ is the shortcut key to create a new file.
- 4. A folder within a folder is called a _____.

Q.4 The jumbled steps/sequences of some of the activities are given below. Read the steps carefully and then number them in proper order. a. Arranging a Family Picnic.

- Make a list of families you would like to invite.
- Select a weekend for your picnic.

- Pack your picnic basket.
- Choose an appropriate location.
- Have a good time and enjoy yourself with your family.
- Create an invitation for the members.
- Distribute the invitations.
- Select the menu and prepare the items or bring them from the market.
- Organize fun games and activities for every member.

b. Shutting Down the Computer.

- Wait for the screen to turn blank.
- Switch off the power supply.
- Click on the Shut down button.
- Save and close all the open files.
- Switch off the monitor.
- Click on the Start button.

Q.5 Write shortcut keys of given terms.

1. To bold the text
2. To copy the selection
3. To apply the Italic effect
4. To run a presentation
5. To add an underline

Q.6 Write Full form of the following.

1.CD. 2. DVD. 3. ROM 4.PB. 5.YB

Section –B

Q.7 The school principal has received complaints from some parents about bullying in the school yard during recess. The principal wants to investigate and end this situation as soon as possible. So, she has asked the recess aides to watch closely. Which situation should the recess it's report to the principal?

1. A girl is sitting glumly on a bench reading a book and not interacting with her peers.
2. Four girls are surrounding another girl and seem to have possession of her backpack.
3. Two boys are playing a one on one game of basketball and are going over the last basket scored.
4. Three boys are huddled over a hand held video game which is not supposed to be on school grounds.

Q.8 Define the following terms.

1. File
2. Reasoning

3. Folder

Q.9 Answer any four of the following question in 20 -30 words.

1. Which folder contains all the drives of hard disc in a computer?
2. Name the button in the recycle bin window that restores all the files/ folders at once.
3. What is the basic storage unit of a computer?
4. What in the brief of BODMAS.

Q.10 Answer any three of the following question in 50 - 60 words.

1. What do you understand by restoring a file/folder?
2. Explain the use of Recycle bin.
3. What is step wise thinking?

Q.11 Practical/Viva/Project(5)

Q.12 Internal Assessment (5)

G.K.

Section -A

Q.-1 Tick the correct option in each case.

1. The Santosh trophy is linked with _____
A. Cricket b. Football C. Hockey
2. Which natural resource is not an ingredient in manufacturing glass bottles ?
A. Sand B. Soda Ash. C. Dirt
3. How many years does it take for an aluminium can to decompose ?
A. 20-40 years B. 62-80 years C. 80-100 years
4. If you recycle a tonne off paper, how many trees are you saving ?
A. 12trees B.17 trees. C. 23 trees
5. Most of the energy used on Earth today originally came from which source?
A. The Sun. B. Oceans. C. Soil
6. Which action does not save energy in our home?
A. Turning all appliances to stand by when not in use
B. Turning off and unplugging all appliances when not in use
C. Leaving lights on in only the rooms you are moving between
7. Recycling two glass bottles saves enough energy to boil water for how many cups of tea?
A. 1 cup of tea B. 3 cup of tea. C. 5 cup of tea
8. Which of the following is not used to generate electricity in the UK?
A. Human waste. B. Solar power. C. Perfume
9. Which of these is a hill station in Northern India
A. Matheran. B. Munnar. C. Mussoorie

10. Which city is well known all over the world for its films industry?

A. Delhi B. Mumbai C. Kolkata

Q.2 Match these places of India with their importance.

Column A

1. A mineral rich state that is home to the Santhal tribe.-
2. A union territory that was a French colony till 1956.-
3. A union territory that is the joint capital of Punjab and Haryana. –
4. It was originally the princely state of Mysore.-
5. The capital of this state that borders Bangladesh is Agartala.-
6. A state that was a Portuguese colony till 1961. -
7. A state known as ancient times as kamarupa. -
8. A union territory of over 30 Islands in the Arabian Sea.
9. India's longest beach the Marina, is in this state.
10. A state that has the holy places of Haridwar , kedarnath, Rishikesh and Hemkund Sahib.

Coloum B

- A. Assam
- B. Jharkhand
- C. Goa
- D. Lakshadweep
- E. Karnataka
- F. Tamilnadu
- G. Tripura
- H. Uttarakhand
- I. Chandigarh
- J. Pondicherry

Q.4 Fill up the blanks. Take help from the given clues.

1. Women ballet dancers are called _____.
2. Noh and Kabuki are kinds of _____ from Japan.
3. _____ are popular television shows about everyday life.
4. _____ is a piece of music written for an orchestra.
5. A _____ is a group of people who sing together.

Q.5 Solve these Riddles.

1. What has many rings, but no fingers?
2. What has eyes that cannot see and a tongue that cannot taste?
3. What is black when it is clean and white when it is dirty?
4. What starts and ends with an 'E', and has a letter in it?
5. What can clap without any hands?

Section -B

Q.6 Answer the following.

1. How many 9's are in the range of numbers from 1 to 100?
2. The Smith family has a mother, father and 4 daughters. Each daughter has one brother. How many members are in the family?
3. How will you rearrange the letters in the words 'new door' to make one word?
4. You are my son, but I'm not your father. Who says that?
5. Divide 30 by $\frac{1}{2}$ and add ten. What do you get?.

Q. 7 Answer the following questions in the context of India

1. Which was the first capital of independent India?
2. Who was the first woman teacher in India?
3. Who was the first Indian woman pilot?

Q.8 answer the following question in the context of World

1. Who invented the first radio?
2. Which is the first university in the world?
3. Which is the first country to make tea?

Q.9 Current Affairs

1. Who was inducted into the ICC cricket Hall of Fame in June 2025?
2. Which country won the 2025 Asia Cup in cricket?