



# Silver Grove School

Sample paper set – B (2025-26)

CLASS- 3

TIME: 2 Hrs.

M.M. 50

Name :

Roll no :

## Instructions:

1. Read all questions attentively.
2. It is compulsory to attempt all questions.
3. Marks for each question have been given.

## English-I

### Section -A

#### Q1. Choose the correct option for each statement.

1. I will call you \_\_\_\_\_ they arrive .  
a. Yet                                      b. While                                      c. When
2. It started raining \_\_\_\_\_ he could reach home.  
a. Before                                      b. after                                      c while
3. What a great achievement is this? This incorrect part in this sentence is \_\_\_\_\_  
a. What                                      b. a great achievement                                      c. is this?
- 4 Which punctuation mark will be used in the sentence, 'Will you come to my house'. \_\_\_\_\_  
a. Comma(,)                                      b. Question mark (?)                                      c. Full stop(.)
5. The sentence, 'Well done! Is an \_\_\_\_\_ sentence.  
a. Interrogative                                      b. Imperative                                      c. Exclamatory
6. 'How beautiful is the day! This is an example of an \_\_\_\_\_ sentence.  
a. Interrogative                                      b. Imperative                                      c. Exclamatory
7. I am feeling hungry, \_\_\_\_\_ I do not want to eat pizza.  
a. And                                      b. but                                      c. While
8. Raghu will meet me in october. The error in this sentence is in the word \_\_\_\_\_  
a. meet                                      b. october                                      c. Raghu

#### Q2. Rewrite the sentences using antonyms in place of the underlined words.

- A. The Mathematics problem was very difficult.
- B. The train is moving.
- C. Most of the students are absent today.

#### Q3. Give the Antonyms of the following words.

- |             |              |            |
|-------------|--------------|------------|
| a. Majority | b. Encourage | c. Lend    |
| a. Obey     | e. Float     | f. Collect |

#### Q4. Give the Synonyms of the following words.

- |           |            |            |
|-----------|------------|------------|
| a. Bold   | b. Request | c. Cartoon |
| d. Latest | e. Explore | f. Mingle  |

**Q5. Give one word for the given phrases.**

- A word opposite in meaning\_\_\_\_\_
- A person who looks on the bright side of things. \_\_\_\_
- That which is against law \_\_\_\_\_
- A life story of a person written by himself. \_\_\_\_
- One who can't read or write. \_\_\_\_

**Q6.Fill the correct homophones words from the given bracket.**

- The \_\_\_\_\_(witch /which) flew away on her broom.
- My sister \_\_\_\_\_(one /won) the first prize.
- Ria \_\_\_\_\_(maid /made) her bed this morning.
- A young \_\_\_\_\_(deer//dear) ran into the woods.
- There are seven days in a \_\_\_\_\_( week/weak).
- The \_\_\_\_\_(made / maid) cleans the house.

**Section-B**

**Q7. Choose the correct conjunction (before, after, but, yet, while or when) to complete each sentence.**

- A car pulled up in front of me \_\_\_\_\_i was riding my bicycle
- It began to rain \_\_\_\_\_ I was walking home.
- He goes to the gym daily \_\_\_\_\_ he cannot play football.
- We waited for him at the café \_\_\_\_\_he did not come.
- Sunita has been learning English for years \_\_\_\_\_she cannot speak Fluently.

**Q8. Rewrite the following sentences using comma(,), question mark (?) Or exclamation mark(!) appropriately.**

- Congratulations you have passed the test
- Ayesha runs fast, but can she beat me.
- She brought some fruits sweets sandwiches and cakes for the guest.
- What a beautiful sight this is
- Did the painter paint the wall white blue and green
- Rohan is a tall handsome well -behaved boy.

**Q9.Identify the type of sentence and write it's name in the given space.**

- Has he played a cricket match before? \_\_\_\_\_
- How beautiful this city is! \_\_\_\_\_
- Hurray! We have landed on the moon \_\_\_\_\_
- Would you like to have green tea or lemon tea? \_\_\_\_\_

**Q10. Write a short paragraph on the topic.**

My Best friend

Or

Festival of holi

**Q. 11. Read the passage carefully and answer the question:-**

Aman loved visiting his grandmother's house during the holidays. Her house was near a small village surrounded by green fields and tall trees. Every morning, Aman woke up early to hear the birds singing. His grandmother gave him warm milk and fresh fruits.

One day, Aman saw a little puppy near the gate. It looked hungry and weak. Aman felt sorry for it. He brought some food and water for the puppy. Slowly, the puppy became healthy and playful. Aman named it Bruno. Bruno followed Aman everywhere and became his best friend.

Aman learned that kindness and care can make a big difference in someone's life.

**Questions (Answer the following):**

1. Where was Aman's grandmother's house located?
2. What did Aman hear every morning?
3. What did Aman see near the gate one day?
4. What name did Aman give to the puppy?
5. What lesson did Aman learn from this experience?

**Q12. Look at the picture carefully and write few lines on it.**



**Q 12. You are Anuj, living in XYZ colony Varanasi, Uttar Pradesh. Write a letter to your friend, telling him about your school.**

Or

**Write a letter to your friend telling him about your visit to a zoo.**

**Q.13 Internal Assessment.**

# English -II

## Section A

### 1 Choose the correct option in each sentences.

1. According to the poet, some animals and birds sleep in a way.  
A. special                      B. unique                      C. funny
2. Little birds sleep standing on  
A. a tree                      B. one leg                      C. the ground
3. Rajam and his family hired a boat which is locally known as \_\_\_\_\_.  
A. Houseboat    B. Shikara                      C. Motorboat
4. Other than the houseboats and row boats, dal is famous for \_\_\_\_\_.  
A. motor boats                      B. island                      C. floating gardens
5. Who impressed King Krishnadevaraya with his high intellect?  
A. Tenali Raman                      B. the visitor                      C. the Royal chef
6. kiku got a toy robot as a gift from his \_\_\_\_\_.  
A. father                      B. friend                      C. father's friend
7. one night, a fairy turned mojo into a \_\_\_\_\_.  
A. real robot                      B. toy robot                      C. machine
8. Abdul showed two \_\_\_\_\_ to Rajam family, surrounded by the chinara tree  
A. Houseboats                      B. Shikaras                      C island

### 2. Write meaning of the following words.

- A. Stationary    B. Cherish    C. Interior    D. Turned    E. Stall    F. twist

### 3. Use the following words into sentence of your own.

- A. Tuck    B. Aromatic    C. Entrust    D. Unwillingly    E. Secret

### 4. Write 'T' if the sentence is true and 'F' if the sentence is false against each sentence .

- A. Some animals and birds sleep in a funny manner.
- B. Chickens stand on their perches when they go to sleep.
- C. Kittens look like a funny ball when they sleep
- D. A man of high intellect visited the district court of vijayanagar.
- E. The challenged the courtiers to find out his mother tongue

### 5. Who spoke the following sentences?

A. It can play with you and help with your work\_\_\_\_\_.

B. I wish you were real\_\_\_\_\_.

C. But you have to keep this secret to yourself. \_\_\_\_\_

### 6. Match the words given in Column A with the related parts given in Column B.

| Column A  | Column B   |
|---|--|
| a. Earlier, people used to <input type="checkbox"/>                         | i. from the end of December to the end of January. |
| b. Srinagar faces extremely cold weather <input type="checkbox"/>           | ii. throughout the year.                           |
| c. The best time to visit the lake is <input type="checkbox"/>              | iii. during the months of July and August.         |
| d. Tourists visit Srinagar <input type="checkbox"/>                         | iv. play cricket and walk on the frozen lake.      |
| e. The floating gardens blossom with lotus flowers <input type="checkbox"/> | v. from May to November.                           |

### 7.. Arrange the events in the order in which they appear in the story by numbering them.

- Abdul showed them the floating gardens, locally known as raad.
- The next morning, Rajam asked his parents to go to the lake named Dal.
- Rajam's parents hired a colourful boat which is locally known as shikara, to visit the lake.
- Rajam and his parents went to Srinagar.
- Abdul told Rajam and his family many things about the houseboats and then took them to one.

### 8. Identify the animals by their actions and write their names .

- snugly tucked
- stretch out

### 9. Fill in the blanks with the correct words to make meaningful sentences.

- The local dishes in the restaurant were rich in fragrant spices. (excellent/unique)
- The boatman, Abdul, was a very person. (nice/gentle)
- There were double bedrooms in the houseboat. (two/three)
- The floating gardens are known as (raads/shikaras)

e. At sunset, the beautiful colours in the sky were reflecting on the water of the lake.  
(cold/calm)

**10. Circle the correct words to make meaningful sentences related to the poem.**

- a. The horse/mice hang their sleepy heads and stand still in a stall.
- b. Chickens sleep while standing on their perch/search.
- c. Kittens curl up/stretch out close in such a funny ball.

**Section -B**

**11. Read the extract and answer the following question.**

The following morning, Tenali Raman \_\_\_\_\_  
\_\_\_\_\_spicy food.

- a. Who is being addressed as gentlemen?
- b. Where was the speaker when he said these words?
- c. What did TenaliRaman disclose?

**12. Answer any Seven questions of the following.**

- 1. What did Rajam and his parents enjoy at the restaurant?
- 2. What are the two islands in the lake surrounded by?
- 3.What challenge did the visitor throw at king krishnadevaraya?
- 4.What happens to the water of the lake during the winter season?
- ,5.What do the cows do when they sleep?
- 6.. How did the visitor react when Tenali Raman revealed his homeland as Tamil?
- 7.. What did Kiku's father tell him to do to get a real robot?

**13. Internal Assessment**

# HINDI-I

खण्ड क

**1. उचित विकल्प पढ़कर शब्दों पर सही का निशान लगाए।**

1. निम्न शब्दों में से क्रिया शब्द क्या होगा ?

1. रोना

2. खाना

3. दोनों

2. वर्षा होती है में क्रिया शब्द क्या होगा ?

1. होना                      2. वर्षा                      3. है

3. निम्न शब्दों में से क्रिया शब्द क्या नहीं होगा?

1. सोना                      2. उड़ना                      3. आम

4. धरती का पर्यायवाची शब्द क्या होगा?

1. नदी                      2. आकाश                      3. बादल

5. निम्न में से बच्चा का विलोम शब्द क्या होगा?

1. बूढ़ा                      2. जवान                      3. बालक

6. घर का विलोम शब्द क्या होगा?

1. बाहर                      2. नीचे                      3. ऊपर

7. प्रतिदिन होने वाला ।

1. दैनिक                      2. साप्ताहिक                      3. मासिक

8. मां खाना पकाती है में क्रिया शब्द क्या होगा?

1. मां                      2. खाना                      3. पकाती

2. सही क्रिया शब्द चुनकर खाली जगह भरिए -

1. सूरज \_\_\_\_\_ रहा है। (निकालता / निकलना)

2. फूल \_\_\_\_\_ है। (खिलना / खिलते)

3. मां पत्र \_\_\_\_\_ है। (लिखती / लिखना)

4. अतुल खाना \_\_\_\_\_ है। (खाता / जाना)

3. दिए गए शब्दों में 'ता' जोड़कर क्रिया शब्द बनाइए-

1. लड़ + ता = \_\_\_\_\_

2. बना + ता = \_\_\_\_\_

3. बैठ + ता = \_\_\_\_\_

4. गिर + ता = \_\_\_\_\_

4. दिए गए वाक्यों में आए क्रियाओं को रेखांकित कीजिए।

1. सूरज चमक रहा है।

2. माली पौधों को पानी देता है।

3. सोनिया जोर-जोर से हंसती है।

4. पिताजी दफ्तर गए हैं।

5. चित्र को देखकर क्रिया शब्द लिखिए



6. दिए गए विराम चिन्हों को पहचान कर उनके नाम लिखिए।

1. (।)

2. (?)

3. (.)

4. (!)

7. निम्नलिखित शब्दों के विलोम शब्द लिखिए

(1) सत्य (2) बड़ा (3) मौखिक (4) कोमल

8. हिंदी की गिनती 31 से 40 तक लिखिए

9. निम्नलिखित शब्दों के दो दो पर्यायवाची शब्द लिखिए।

1. नारी 2. समुद्र

10. निम्नलिखित मुहावरों के अर्थ लिखकर वाक्य प्रयोग करिए

1. उल्लू बनाना 2. आसमान सिर पर उठाना


(खंड ख)

11. दिए गए चित्र को देखकर 6 पंक्ति लिखिए ।





12. दिए गए चित्रों को देखकर कहानी लिखिए



13. नीचे दिए गए विषयों में से किसी एक पर अनुच्छेद लिखिए ।

1. वर्षा ऋतु

2. चंदामामा

14. निम्नलिखित गद्यांश को पढ़कर पूछे गए प्रश्नों के उत्तर लिखिए।

राजू तीसरी कक्षा का विद्यार्थी था। अगले दिन राजू के स्कूल में स्वतंत्रता दिवस समारोह था। उसे भी सामूहिक कार्यक्रम में भाग लेना था। राजू के लिए स्कूल के किसी भी समझ में भाग लेने का यह पहला अवसर था। इसलिए वह बहुत उत्साहित था। रात को ही उसने अपनी यूनिफॉर्म को प्रेस करके रख दिया।

1. राजू किस कक्षा में पढ़ता था?
2. राजू के विद्यालय में कौन सा कार्यक्रम होने वाला था?
3. राजू के लिए कार्यक्रम में भाग लेने का कौन सा अवसर था?
4. रात को राजू ने क्या किया ?

15. पत्र लेखन

अपने बीमार मित्र का हाल-चाल जानने के लिए उसे पत्र लिखिए

16. 'प्रिय मित्र' पर निबंध लिखिए।

17. निम्नलिखित प्रश्नों में से किन्हीं तीन प्रश्नों के उत्तर दीजिए ।

1. विराम चिन्ह किसे कहते हैं?
2. कोई दो क्रिया शब्द लिखिए ।
3. विराम चिन्ह किसे कहते हैं?
4. हिंदी भाषा के किन्हीं चार विराम चिन्हों के नाम लिखिए ।

18. आंतरिक मूल्यांकन

# HINDI-II

## खण्ड क

1. सही उत्तर चुनकर सही का निशान लगाए।

(4)

1. वैद्य जी किसी से डरते थे ?

i) ईश्वर से                      ii) बच्चों से                      iii) दोनों से

2. वैद्य जी का स्वभाव कैसा था?

i) दुष्ट                      ii) भला                      iii) क्रोधी

3. बालक के हाथ में क्या आ गया?

i) मैना का बच्चा                      ii) सांप का बच्चा                      iii) तोता

4. चुन्नू पापा से कहां जाकर मिट्टी की चीज लाने को कहता है?

i) बाजार से                      ii) कुम्हार से                      iii) दुकान से

5. पत्थर कहां से आया होगा?

i) पहाड़ी से                      ii) आलीशान मकान से                      iii) हवा से

6. सबसे पहले पत्थर से कौन टकराया?

i) महात्मा जी                      ii) दूधवाला                      iii) गांव का मुखिया

7 पत्थर से टकराने के बाद मुखिया कहां छिप गया?

1 पेड़ के पीछे।                      2 पत्थर के पीछे                      3 मकान के पीछे

8 महात्मा जी के जाते ही कौन आया?

1 सैनिक                      2 दूधवाला                      3 सिपाही

2 . निम्नलिखित शब्दों के अर्थ लिखिए (5)

अभिमान, छुट्टी , एहसास, धक्का देना, अचरज

3. सही वाक्य पर सही (✓) और गलत वाक्य पर गलत (X) का निशान लगाइए

1) मनुष्य ने चक्की और चक्र का आविष्कार किया ।

2) मानव ने सबसे पहले पेड़ के गोल टुकड़े से पहिए बनाए।

3) आदिमानव गाड़ियों में बैठकर शिकार किया करते थे।

4) पहिए की खोज आदिमानव ने की थी।

5) अंत में मुखिया ने पत्थर हटाए।

6) पहिया बैलगाड़ी, साइकिल, मोटरसाइकिल ,हेलीकॉप्टर को उड़ता है

- 7) कुम्हार मिट्टी के बर्तन बनाते हैं ।
- 8) चुन्नू के दादाजी कुम्हार का काम करते थे
- 9) पहिए के आने से मनुष्य का काम आसान हो गया ।
- 10) मनुष्य ने सबसे पहले चक्की और चक्र का आविष्कार किया ।

#### 4. दिए गए वाक्यों को किसने, किसे कहा ?

1. “बच्चों !तुम में से किसे मैंना का बच्चा चाहिए?”
2. “मम्मी ,कुमार क्या होता है?”
- 3.” पर हमारे घर में तो मिट्टी के बर्तन है ही नहीं।”
- 4.” अब जाकर अपने पापा जी से पूछ ,उनके पिताजी कुमार ही थे।”
5. “सच! पापा हम बनाएंगे?”
6. “इस मिट्टी से कभी अलग नहीं होना ।”

#### 5. दिए गए खाली स्थान को कोष्ठक में दिए गए शब्दों में से छांटकर भरिए

[प्राणियों, लापरवाह ,महात्मा ,चिकनी ,आलीशान ,पिताजी ,अचानक, कोई साधन]

1. चुन्नू ने अपनी मां का चेहरा ऐसे देखा जैसे वह दूसरे ग्रह में रहने वाले \_\_\_\_\_ के बारे में बता रही हो
2. पिताजी का पसंदीदा काम था \_\_\_\_\_ मिट्टी से कंकड़ पत्थर- अलग करना ।
3. डूबते हुए सूरज को देखकर आज अपने गांव \_\_\_\_\_ की हर बात याद आ रही है।
4. शहर के लोग बड़े \_\_\_\_\_ होते हैं ।
5. पास ही एक \_\_\_\_\_ मकान बन रहा था ।
6. एक \_\_\_\_\_ जी राम राम जपते हुए वहां से गुजरे।
7. मेरी खोज \_\_\_\_\_ ही हुई थी।
8. मनुष्य के पास एक स्थान से दूसरे स्थान जाने का \_\_\_\_\_ नहीं था।

#### 6. निम्नलिखित पाठ्यांश को पढ़कर नीचे पूछे गए प्रश्नों के उत्तर दीजिए

एक बार विजयनगर राज्य में भीषण अकाल पड़ गया ।चारों ओर त्राहि त्राहि मची थी ।हरियाली का कहीं नामों निशान नहीं था ।वर्षा भी होने का नाम नहीं ले रही थी । विजयनगर में

तेनालीराम का घर तुंगभद्र नदी के किनारे पर था । उसका बगीचा भी बिलकुल सूख गया था ।  
बगीचे के बीचो-बीच एक कुआं था। प्रश्न

- 1 विजयनगर राज्य में क्या पड़ गया था?
2. चारों ओर क्या मची थी?
3. तेनालीराम का घर किस नदी के किनारे था?
4. कुआं कहां था?

**7. निम्नलिखित प्रश्नों के उत्तर 20 30 शब्दों में दीजिए (6)**

- प्रश्न 1 पाठ में कौन अपने बारे में बता रहा है?
- प्रश्न 2 पहिए को और क्या कहते हैं ?
- प्रश्न 3. पहिया ना चले तो क्या होगा ?
- प्रश्न 4. चुन्नू के दादाजी क्या काम करते थे ?
- प्रश्न 5. अंत में पत्थर को किसने हटाया ?
- प्रश्न 6. पहिए को और क्या कहते हैं?

**8. निम्नलिखित प्रश्नों में से किन्हीं तीन के उत्तर 50 60 शब्दों में दीजिए**

- प्रश्न 1. पहिया कहां-कहां पर काम आता है?
- प्रश्न 2 पहिए की खोज कैसे हुई?
- प्रश्न 3 दादा जी ने अपने आखिरी समय में पिताजी से क्या कहा?
- प्रश्न 4 मुखिया ने शहर के लोगों को लापरवाह क्यों कहा?
- प्रश्न 5. मनुष्य में दो पहिए वाली गाड़ी कैसे तैयार की?

**9. अभ्यासार्थ**

1. नीचे लिखे शब्दों के विलोम शब्द लिखिए  
गांव , बीमार , मा , शांत
2. नीचे लिखे शब्दों के दो दो पर्यायवाची शब्द लिखिए  
चतुर, उदास
3. नीचे लिखे शब्दों के वाक्य प्रयोग कीजिए  
हलचल, कंगाल

## 10. विचार मंथन प्रश्न

नीचे दिए गए दोनों पक्षियों का रंग एक जैसा होने पर भी लोग एक को पसंद करते हैं और दूसरे को नापसंद, क्यों ? दो वाक्य लिखिए।

कौवा।

कोयल

## 14.आंतरिक मूल्यांकन

# MATHS

## Section – A

Q1. Tick the correct option for the following:-

- a. If you want to fill your swimming pool with water then which container would you use?  
i. glass    ii. Mug    iii. Bucket
- b. Pavan had rs.85. He bought a pencil box for rs.35 and 50 paise. How much money is left with him?  
i.            Rs.49 and 5 paise.    li. Rs.30 and 50 paise.    lii. Rs.40 and 50 paise
- c. The sun is at its peak at what time of the day?  
i.            Morning.    li. Noon.    lii. Evening.    iv. Night
- d. I am a 3-digit number. If you add 1 to me, you have to regroup two times. Which number am I ?  
i. 100.    ii. 899.    iii. 989
- e. two milk containers contain the quantity of milk as soon which container contains more quantity of milk and by how much?



- i. P, 3L.    li. P, 5L    lii. Q, 3L    iv. Q, 5L
- f. How many hours are in  $\frac{1}{3}$  of a day?  
i. 6 hours.    li. 12 hours.    lii. 24 hours    iv. 8 hours
- g. The Mount of a liquid a container or a vessel can hold is called \_\_\_\_\_ of the container i. capacity    ii. volume.    iii. Weight
- h. How much paise are there in rupees 5 and 70 paise?

i.550 paise.    ii.570 paise.    iii.520paise

**Q2. State whether the following statements are true or false :-**

- a. An event that does not repeat itself in the same manner is known as noncyclic event.
- b. Subtracting one from a number give the previous number.
- c. When a shape is divided in four equal parts called thirds.
- d. 12 O' clock at night time is called Noon.
- e.  $126+1=126$


**Q3. Fill in the blanks for the following:-**

- a. The fraction for the red balloons will be\_\_\_\_\_



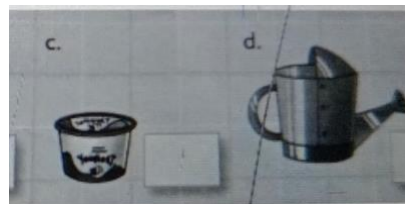
- b. When shape is divided into two equal parts is called\_\_\_\_\_.

c.

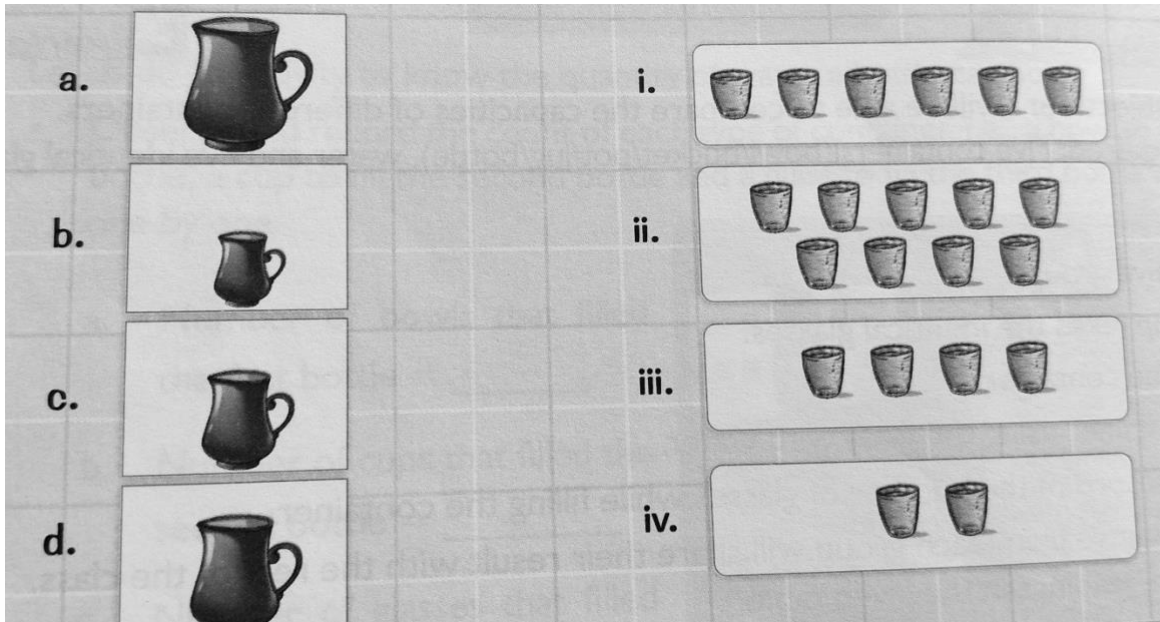


- d. Rs.8 X \_\_\_\_\_=800 paise.

**Q4. What unit must be used (mL/L ) to measure the capacity of the given liquids?**




**Q5. Match the following:-**



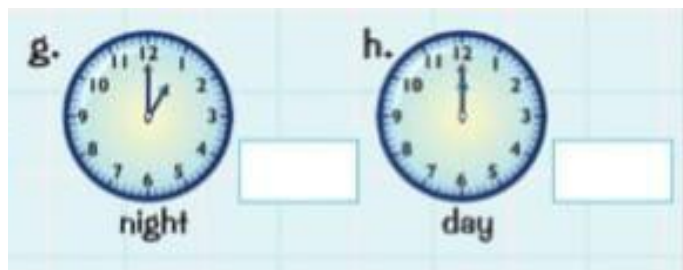
Q6. Compare and put the appropriate symbols ( > , < or = ) :-

- a. 25 L \_\_\_\_\_ 30 L.      b. 4L \_\_\_\_\_ 400ml  
 c. 700 L \_\_\_\_\_ 700 L.      d. 18 L \_\_\_\_\_ 1800mL

Q7. Tick the greater major in each of the following pairs.



Q 8. Read the given clocks and write the time, a. m. or p. m., as per the given intervals of the day:-



Q9. Madhu and 4 of her friends went to a restaurant mother's food they got the bill ass shown:-

| Mother's Food                                    |                        |                     |                      |                   |
|--|------------------------|---------------------|----------------------|-------------------|
| Bill No: 45                                      |                        |                     | Date: 13/10/2023     |                   |
| S.No.  | Food Item              | Number of Food Item | Cost per Item (in ₹) | Total Cost (in ₹) |
| 1.   | pani puri              | 5                   | 15                   | 75                |
| 2.   | ice cream              | 3                   | 10                   | 30                |
| 3.   | dosa                   | 5                   | 40                   | 200               |
| Total Amount                                     |                        |                     |                      | ₹305              |
| Read the bill and fill in the following details. |                        |                     |                      |                   |
| a.   | Name of the restaurant |                     |                      |                   |
| b.   | Date of the bill       |                     |                      |                   |
| c.   | Bill No                |                     |                      |                   |
| d.   | Cost of 1 ice cream    |                     |                      |                   |

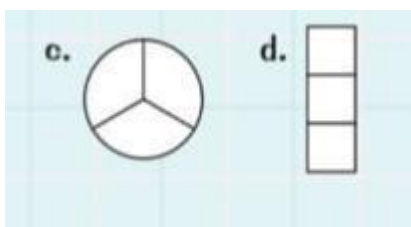
**Q10.** The table given below shows the sale of a few items made by Rajiv in a day. Calculate the total cost of each type of item and the total amount he obtained in a day:-

|    | Item       | Number of items | Cost per Item (in Rs.) | Total Cost (in Rs.) |
|----|------------|-----------------|------------------------|---------------------|
| a. | Crockery   | 2               | 40                     |                     |
| b. | Sugar pack | 3               | 24                     |                     |
| c. | Soap       | 5               | 12                     |                     |
| d. | Shirt      | 1               | 290                    |                     |

**Q11.** Complete the given table using the facts in addition:-

|    | +   | 0 | 1 | 2 | 10 |
|----|-----|---|---|---|----|
| a. | 459 |   |   |   |    |
| b. | 675 |   |   |   |    |
| c. | 177 |   |   |   |    |
| d. | 34  |   |   |   |    |

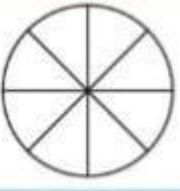
**Q12.** Colour one – third of the following shapes:-






**Q13. Colour the figures to represent the given fractions.**

a.


$\frac{3}{8}$ 


b.

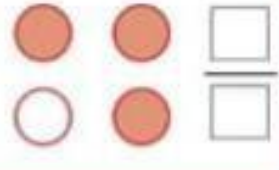
$\frac{7}{10}$ 


**Q14. Write the fraction represented by the parts of the given collection that are not shaded**

b.



c.




**Q15. Number the given pictures in chronological order for each of the following:-**




**Q16. Find the numerator and denominator of each of the following shaded fraction.**

a.



b.



**Q17. Pick the correct event that comes after the given event in each of the following:-**



**Q18. Subtract the given numbers using the quick ways of subtraction :-**

a. 790-349

b. 340-111

c. 450-233

d. 765-432

**Q19. Mr. Ayer went to a mart to buy fruits and vegetables . Complete the given bill.**

| S.No. | Items      | No. Of items | Cost per kg | Total cost |
|-------|------------|--------------|-------------|------------|
| 1     | Apples     | 3kg          | 85          |            |
| 2     | Beetroot   | 2kg          | 20          |            |
| 3     | Ladyfinger | 1kg          | 30          |            |
| 4     | Watermelon | 4kg          | 50          |            |

### Section – B

**Q20. Arrange the following as instructed:-**

a. 324L, 400L, 100L, 800L ( ascending order)

b. 392 mL, 408L, 49L, 269 mL ( descending order)

**Q21. Sort the given events as cyclic and non cyclic :-**

a. Movement of the hour hand of a clock.

b. Growth of a plant

c. Occurrence of day and night


d. Reading a novel.

| Cyclic Event | Non Cyclic event |
|--------------|------------------|
|              |                  |


**Q22. Show the following time on the given clocks. Also, write the time in a.m. or p.m.**

a. 5 o' clock in the morning

b. Half past 3 in the afternoon



**Q23. Solve the following :-**



**Q24. Arrange the given steps in the correct chronological order for making oats:-**

a. Pour the oats in the

ball

b. Take a bowl

c. Get some oats

d. Take a scoop of oats and eat

e. Add some hot milk to the bowl.

**Q25. Subtract the given numbers using the quick ways of subtraction and addition:** a.  $450 - 101$

b.  $55 + 65$

**Q26. Word problem ( attempt any two ) :-**

a. Rashi has rs 54 and 16 paise and Parul has rs 35 and 60 paise. How much money do they have in total?

b. Rakesh bought a shirt for rs 346 and 94paise, a pair of socks for rs 32 and 20 paise. How much money did he spend in total?

c. Write any two examples of cyclic events and one example of a non cyclic event.

d. In a cricket match series of 5 days, Virat Kohli scored 234 runs and Rohit Sharma scored 879 runs. How many runs did they score altogether? use the quick way of addition. e. Arrange the given steps in the correct logical order for making a school bag.

Place them in the bag properly.

Check your stationery items.

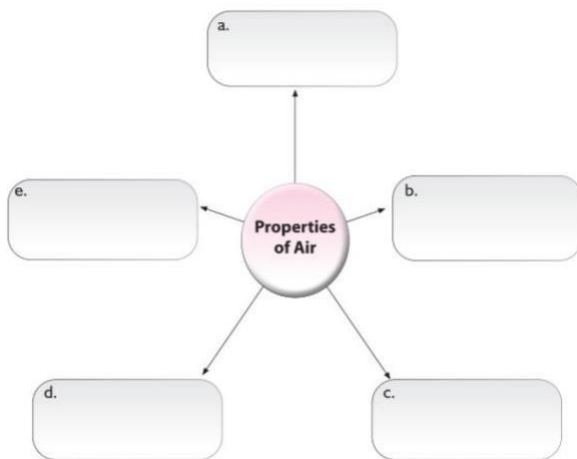
Arrange the books according to the time table.

| A             | B       |
|---------------|---------|
| a. Omnivores  | Frog    |
| b. Carnivores | Hen     |
| c. Parasites  | Dog     |
| d. Scavengers | Leeches |

**Q4. Unscramble the words to find the correct answer**

1. When the winds blow very gently it is called a \_\_\_\_\_.(EEERZB)
2. Fish, ducks, lobsters and octopus are \_\_\_\_\_ animals.(UATICAQ)
3. The animals that eat both plants and animals are called\_\_\_\_\_.(SEROVINMO)
4. In the process of \_\_\_\_\_ plants take in carbon dioxide and release oxygen into atmosphere.(SISEHTNYSOTOHP)

**Q5. Complete the given graphic organiser by giving the different properties of air.(3marks)**



**SECTION- B.**

**Q6. Write meaning of the following**

- |          |              |               |            |
|----------|--------------|---------------|------------|
| 1.exerts | 2.spectacles | 3.interlinked | 4.food web |
|----------|--------------|---------------|------------|

**Q7. Define the following terms**

- a. Food chain
- b. Decomposer
- c. Interdependence
- d. Storm

**Q8. Answer question in 30-40 words.**

- a. What is habitat?
- b. What are amphibious animals?
- c. What is a food web?
- d. How does Air support burning?

**Q9. Answer questions in 50 to 60 words**

- a. What is the importance of national parks and reserved areas?
- b. Explain how soil is helpful for plants?

**Q 10 Draw and colour the following questions.**

- a. Draw and label a parts of Flower
- b. Draw and label the parts of the plant

**Q11 Difference between**

- a. Carnivores and omnivores
- b. Gale, storm and wind

**Q.12 Internal assessment**

# **SOCIAL STUDIES**

## **Section (A)**

**Tick (✓) the correct option**

- 1-We can watch live matches through the \_\_\_\_  
(i) radio      (ii) newspaper      (iii) satellites
- 2-\_\_\_\_ is the second smallest continent.  
(i) Australia      (ii) Antarctica      (iii) Europe
- 3-The largest continent in the world is \_\_\_\_  
(i) Africa      (ii) Asia      (iii) Europe
- 4-The smallest ocean in the world is the \_\_\_\_ Ocean.  
(i) Indian      (ii) Atlantic      (iii) Arctic
- 5-\_\_\_\_ is a means of non-verbal communication.  
(i) Telephone call      (ii) Letter      (iii) Facial expressions
- 6-The longest river in the world is the \_\_\_\_  
(i) Amazon      (ii) Nile      (iii) Ganga
- 7-Television, radio and newspapers are called \_\_\_\_  
(i) Personal media      (ii) Mass media      (iii) Local media
- 8-The capital of India is \_\_\_\_  
(i) Mumbai      (ii) New Delhi      (iii) Kolkata
- 9-\_\_\_\_ is used to send messages instantly.  
(i) Postcard      (ii) E-mail      (iii) Courier
- 10- \_\_\_\_\_ is the second smallest continent.  
i) Australia      ii) Antarctica      iii) Europe

**2) Fill in the blanks. 5**

- a) \_\_\_\_\_ is the only continent where there are no countries.
- b) Sharing or exchanging information is known as \_\_\_\_\_.
- c) E-mail means \_\_\_\_\_ mail.

- d) \_\_\_\_\_ is the coldest continent on Earth.
- e) Letters and postcards were used for \_\_\_\_\_ in olden times.
- f) The \_\_\_\_\_ helps us send messages quickly across the world.
- g) The Earth has seven \_\_\_\_\_.
- h) News reaches many people at the same time through \_\_\_\_\_.
- i) Antarctica is covered mostly with \_\_\_\_\_.
- j) Newspapers are a part of \_\_\_\_\_.

**3-Complete the given table- 4**

- a) Smallest continent in the world — \_\_\_\_\_
- b) Longest river in the world — \_\_\_\_\_
- c) Largest island in the world: \_\_\_\_\_
- d) Smallest country in the world: \_\_\_\_\_

**4- Unjumble the jumbled word. 3**

- i) MMUINOCCAITN                      ii) EPOURE    iii) IATSNNOUM

**5- State whether the following statements are true or false. 4**

- i) In ancient times, pigeons were used as a means of communication.
- ii) Television is a modern means of communication.
- iii) Newspapers help in spreading information to many people.
- iv) Mobile phones are slower than letters for communication.

**6- Identify and write the names of the continents. 3**

- a) The continent where the Sahara Desert is located: \_\_\_\_\_
- b) The coldest continent: \_\_\_\_\_
- c) The continent without any country \_\_\_\_\_

**Section B**

**7-Correct the following sentences and rewrite them. 5**

- 1-Indian Ocean is the coldest ocean.
- 2-Amazon is the largest desert in South America.
- 3-Antarctica is a continent that has a very hot climate
- 4-Asia is the smallest continent in the world.
- 5-Pacific Ocean is the smallest ocean.

**8- Answer questions in 30–40 words. 3**

- 1-How many continents are there in the world?
- 2-What is an ocean?
- 3-Why is communication important in daily life?

**9-Answer questions in 50–60 words. 3**

1-Write any two advantages of telephone.

2-Describe different means of communication used today.

**10- Write the meaning of the following words- 2**

1- amazon 2- landforms

**11- Define the following term- 3**

a) continents

b) gestural communication

**12- Label five oceans on the world map. 5**

# COMPUTER

## Section-A

**A. Tick (✓) the correct option.**

1. Which of the following options is used to create a copy of an object?

a. Skew and Resize.

b. Cut and Paste.

c. Copy and Paste

2. Where do you draw in the paint window?.

a. Title bar

b. Ribbon

c. Canvas

3. .ppt is the extension of an\_\_\_\_\_

a. MS word

b. MS PowerPoint

c. MS Excel

4. BMP stands for

a. Bit move

b. Bitmap

c. Bitmag

5. To create a simple text file you must have\_\_\_\_\_ present in your computer.

a. Text editor

b. Word processor

c. Graphic program

**B. Fill in the blanks using the words given below.**

1. To stretch an image horizontally use the \_\_\_\_\_ option.

2. The \_\_\_\_\_option is present in the image group.

3. The shortcut key to copy a file is\_\_\_\_\_.

4.A\_\_\_\_\_is used to store a set of related files.

5.\_\_\_\_\_is a folder that contains all the related files and folders.

**C. Write 'T' for true and 'F' for false.**

1. The free form selection tool select the entire drawing at once.

2. By default a paint file gets .png as an extension

3. You can rotate a part of a picture by 180 degree at a time.

4. A drawing made in MS paint can not be set as a desktop background

**D. Write the shortcut command for each.**

1. To permanently delete a file and folder\_



2. To open a saved file\_\_
3. To Copy\_\_
4. To Select All\_\_\_\_
5. To Bold\_

**F. Rearrange the jumbled words:**

- 1.OFERDL
- 2.REFIIGNAM
- 3.WKSE
- 4.AVES
- 5.AIPTN

**Section B**

**A.Short answer type questions: ( Do any four).**

1. Name any one place in your school where you can find files and folders.
2. Where do all the deleted files and folders go?
3. What is the use of skew command?
4. Where is the zoom slider by project in the MS paint window?
5. What is the full form of PNG?

**B. Long answer type questions:**

1. How will you create a callout shape in paint?
2. Write the utility of select tool . Name any two select tools.
3. What is the purpose of creating a folder?

**C. Write the difference between of the following:**

- a. Difference between copying and moving of object.
- b. Difference between file and folder.

**D. Define the terms**

- |                          |                   |           |
|--------------------------|-------------------|-----------|
| 1. Rectangular selection | 2. Magnifier tool | 3. Moving |
| 4. Window explorer       | 5. Callout shape  |           |

**E.Write the full forms of the following:**

- |         |       |         |        |
|---------|-------|---------|--------|
| 1. JPEG | 2.CPU | 3.Email | 4. BMP |
|---------|-------|---------|--------|

**F. Application based questions.**

1. Reena has created multiple Paint files. She has saved all the files in D: drive. Her Art teacher asks her to save all the files in one storage place and name it 'My Drawings'. She does not know how to do so. Suggest her the correct storage area which she could use for the same.

2. Yash wants to permanently delete some files and folders from his computer system. Which key combination can help him complete the task?

**G. Internal assessment**

**H. Practical assessment**

## **G.K**

**Q .1 Choose the correct options-**

**(6)**

**a. We should get a new backpack when –**

**(i) Our classmates show off theirs**

**(ii) The old one is torn and unusable**

**b. It can be a precious gift for mother Earth.**

**(i) Planting a saplings and taking care of it.**

**(ii) Littering a packet of toffees.**

**c. You're heading to the park from your bedroom. What do you do with the room lights and fan?**

**(i) Leave them running      (ii) Turn them off**

**d. You are writing an essay on a blank paper. you think that some sentence you have written are unnecessary. you should-**

**(i) Erase the sentence and carry on with the essay.**

**(ii) Tear the paper and throw it in the dustbin.**

**e. You find unused notebooks at home. You will –**

**(i) Toss them in the trash      (ii) Donate to kids who need them.**

**f. You need to pack your lunch for a picnic. You will use –**

**(i) A plastic carry bag      (ii) A cloth or jute bag.**

**g. You are at a birthday party. you take-**

**(i) Lot of food and throw away the leftovers. (ii) Only as much as you can eat.**

**h. Which planet supports life?**

**(i) Earth      (ii) Mars.**

**i. You have the option of having a shower bath or using bucket and mug to bathe. you will-**

**(i) Choose the second option.**

**(ii) Sundar first option.**

**j. 4 ones and 7 tens equals –**

**(i) 74**

**(ii) 47**

**k. What comes next in the series: 4, 9, 16, 25, \_\_\_\_ ?**

**(i) 36**

**(ii) 49**

**L. 1000 is the same as-**

**(i) 100 ones**

**(ii) 10 tens**

**Q.2 Match the words given in Column A with the related parts given in Column B.**

4

**Column(A)**

- a. Kaziranga National Park
- b. Bandipur National Park
- c. Kahna national park
- d. Gir wildlife sanctuary

**Column(B)**

- i Karnataka
- ii. Gujarat
- iii. Madhya pradesh
- iv. Assam

**Q. 3 Read the sentence given below carefully. Then ( T ) the sentence expressing good etiquette then (F)the others-**

6

- a. We should all always we on time the showing our respect for the other person. ( )
- b. We should listen attentively and patiently when someone is speaking to us.( )
- c. We should speak in our mother tongue with our family members when there is a guest in our house who does not understand the language. ( )
- d. We should respect people when we are interacting with them. ( )
- e. We should not litter around. ( )
- f. It is right to interrupt when someone is speaking. ( )

**Q.4 Fill in the blanks-**

5

- a. There are currently \_\_\_\_\_member countries in the UN.
- b. At its founding, the UN had\_\_\_\_member States.
- c. There are\_\_\_\_\_official languages of the UN.
- d. \_\_\_\_coined the term United nation.
- e. The UN's chif administrative officer is the\_\_\_\_\_.

**Q.5 write the name of the city with the state day belong to-**

5

- a. The City of joy
- b. The silicon valley of India
- c. The temple city of India
- d. The city of Ghat
- e. The orange city

**Section (B)**

**Q.6Answer the following questions in context of word.-**

6

- a. **Who** was the first man in the world?
- b. Who was the first woman in the world?
- c. Who discovered america?
- d. Who was the first prime minister of Britain?
- e. Which was the first newspaper in the world?
- f. Which was the first book printed in the world?

**Q.7 Answer the following questions in context of India-**

**6**

- a. First man president of India.
- b. First Indian to receive the Bharat Ratna.
- c. First Chief Justice of India.
- d. First Indian to win the Nobel Prize.
- e. First man to climb Mount Everest.
- f. First woman Prime Minister of India.

**Q.8 Current affairs-**

**5**

- a. India's ICC Women's World Cup title.
- b. How many individuals were honoured with the Padma Vibhushan Award in 2025?
- c. 22nd ASEAN-India Summit location.
- d. Which awardees got it posthumously?
- e. How many individuals received the Padma Vibhushan in 2025?

**Q.9 Identify the following personalities-**

**2**

a.



b.



c.



d.



**Q.10 Internal Assessment-**

**5**

