



Silver Grove School

SAMPLE PAPER 2(2025-26)

CLASS- 1

SUBJECT: ENGLISH I(SET-B)

Name :

Roll no :

Instructions:

- a. Read the question paper carefully.
- b. Attempt all questions. Marks are given against each question.

Q1. Multiple choice questions.

1. I will give chocolates to you.

- a. this b. these c. those

2. people are standing.

- a. this b. that c. those

3. She will use bottle.

- a. these b. this c. those

4. Flower vase is kept the table

- a. under b. in c. on

5. The airplane is flying in the sky.

- a. up b. down c. on

Q2. Write the antonym for the following words

a. perfect _____

b. strong _____

c. dangerous _____

d. below _____

e. enemy _____

Q3. Write the synonym for the following words.

a. sleep _____

b. clean _____

c. present _____

d. fast _____

e. cool _____

Q4. Write one word for the following.

a. A person who takes care of a garden.

b. A tale of animals.

c. A baby frog _____

d. I mend shoes.

e. A group of students.

Q5. Write homophones for the following words.

a. tail _____

b. hair _____

c. one _____

d. flour _____

e. knight _____

Q6. Fill in the blanks with the help of 'this' 'that' 'these' and 'those.'

a. _____ are my shirts.



b. _____ is my friend Joy.



c. Look at _____ birds in the sky.



d. _____ are my books.



e. _____ is my house.



f. _____ are shoes.



Q7. Fill in the blanks with the help of "has " and " "have".

1. She _____ one sister.
2. We _____ to go to market.
3. She _____ few crayons.
4. A triangle _____ three sides.
5. I _____ given my book to her.

Q8. Write a short composition on the following topic " Summer Season".

Q9. Observe the picture very carefully and write the answers of the following question (5).



Nida has a red ball. She likes to play with it in the park. One day, she takes her ball to the park and plays with her friend, Sara. They kick the ball to each other and have so much fun. She forgets her ball at the park. She is sad.

a. Complete the answers of the following questions.

i. What colour is Nida's ball?

Nida's ball is _____.

ii. Where does Nida like to play with her ball?

Nida likes to play with her ball _____.

Q10. Fill up the blanks with the help of an article. (A, An ,The)

(2.5)

1. ____ sun

2. ____ chair

3. ____ earth

4. ____ tree

5. ____ paper

Q11. Write the Feminine Gender for the following words.

(5)

1. lion _____

2. ox _____

3. uncle _____

4. king _____

5. bride _____

Q12. Change singular sentences into plural using " These " and "Those" .

(5)

a. This is a computer.

b. That is Tom's bag.

c. This is a biscuit.

d. That is not my book.

e. This is my toy.



Silver Grove School

SAMPLE PAPER 2(2025-26)

CLASS- 1

SUBJECT: ENGLISH II(SET-B)

Name :

Roll no :

Instructions:

- Read the question paper carefully.
- Attempt all questions. Marks are given against each question.

Question 1: Write the meaning of the following words-

- Tale- _____
- Busy - _____
- Carefully - _____
- Invited - _____
- Various- _____
- Naughty - _____

Question 2: Frame sentences in your own words-

- Caught - _____
- Invited- _____
- Holding - _____
- Raincoat - _____
- Song - _____

Question 3: Answer the following questions-

- Who cooked the meal for the party?

Ans- _____.

- Why was Krishna sad?

Ans. _____.

c. Why Sheru thanked all the animals?

Ans. _____.

d. Who played the drums?

Ans. _____.

Question 4: Fill in the blanks -

[raincoat, water, decorated , pup, tub]

a. Chinti, the ant _____ the cake.

b. Krishna felt happy after wearing the _____.

c. There is _____ in a jug.

d. The oranges are in a _____.

e. The _____ is brown in colour.

Question 5: Read the given dialogues and write the names of the speakers.

a. You forgot it at home. _____

b. We will give a surprise party to Sheru. _____

c. Krishna, why are you looking outside the window?

(d) I will organise a dance party for my animal friends.

(e) Do not go to Mr Mc Gregor's garden.

Question 6: Write one rhyming word for the following.



Question 7: Complete the Poem:

(i) Hello, _____!

What do you _____?

Will you _____,

Our _____ _____?

(ii) _____ neighbour!

What do you _____?

Will you _____?

Our _____ _____?

Question 8 - Tick (✓) the correct option. (5)

(a) Peter was a _____ rabbit.

(ii) Naughty []

(iii) Smart []

(iv) Blunt []

(b) In summer seasons, children _____

(i) Stay indoors []

(ii) Drink hot soup []

(iii) Wear raincoats []

- (c) Bholu, the bear _____
(i) Cooked the meal []
(ii) Decorates the cake []
(iii) Chopped the vegetables []
- (d) At the end of the party, Sheru _____
(i) Asked for more presents []
(ii) Thanked all the animals for the party. []
(iii) Went to sleep. []
- (e) What did the animals sing for the lion?
(i) Happy New Year []
(ii) Happy Anniversary []
(iii) Happy birthday []

Question – 9. State whether the following statements are ‘ True’ or ‘ False’ –

- (a) Peter fell into a can of water. []
(b) We eat ice cream in winter season.[]
(c) Peter’s mother went to the market. []
(d) The next day it was snowfall. []
(e) When it rained Krishna’s raincoat was at school. []

10: Circle the odd one out-

- a. I, me , mine, you
- b. Wheel, whale, white, shark
- c. Help, assist, eat, support
- d. Table, chair, bed , rabbit
- e. In, on, raincoat, under
- f. Joyful, cheerful, happy, unhappy



Silver Grove School

SAMPLE PAPER 2 (2025-2026)

CLASS- 1

SUBJECT: Hindi 2

SET - B

TIME: 2 Hrs.

M.M. 50

Name :

Roll no :

निर्देश: सभी प्रश्नों को करना अनिवार्य है।

1. निम्नलिखित कथनों को पढ़कर उचित विकल्प पर सही का निशान लगाए।

10

1. नदी किनारे किसका पेड़ था?

1. बरगद

2. नीम

3. जामुन

2. रोटी कैसे बनती है?

1. गेहूं के दाँ

2.

से

3. राजू कहाँ जाकर छुप गया?

1. कार के पास

2. मैदान में

3. बस में

4. रजनी ने सूरज में कौन सा रंग भरा?

1. लाल

2. काला

3. सफेद

5. पुष्प का पर्यायवाची शब्द क्या है?

1. दिनकर

2. कुसुम

3. नीर

6. पेड़ पर कौन रहते थे ?

1. पक्षी

2. बंदर

3. दोनों

7. गुब्बारे लेकर कौन आया?

1. मछली

2. बिल्ली

3. शमशेर

8. खोवे से क्या बनता है?

1. जलेबी

2. पेड़ा

3. बर्फी

9. मीठे सेब में रजनी ने कौन सा रंग भरा?

1. पीला 2. हरा माल

10. अपनी घर को हमें कैसा रखना चाहिए?

1. गंदा 2. साफ 3. खराब

2. सही शब्द चुनकर खाली जगह भरे।

4

1. नदी के किनारे एक _____ का पेड़ था। (पीपल/ बरगद)

2. हम खेत में _____ बोते हैं। (बीज/ पत्थर)

3. गेहूं को _____ में पीसा जाता है। (चक्की/ मक्की)

4. गेहूं के दाने _____ से आते हैं। (खेतों/ तालाबों)

3. सही वाक्य पर सही (✓) तथा गलत वाक्य पर गलत (×) का निशान लगाइए। 4

1. बरगद का पेड़ छोटा और कमजोर था। ()

2. स्वाद का बुलबुला नाम है मेरा जलेबी। ()

3. खोये से बनती हूं, नाम मेरा इमरती। ()

4. हंसने कोयल की सहायता नहीं की। ()

5. दिए गए पंक्तियों को पूरा करें।

4

1. हरे, बैंगनी _____,

_____ कितने भेद।

2. हाथों से _____,

_____ खूब संभाल।

6. निम्नलिखित शब्दों के दो - दो समानार्थी शब्द लिखिए।

3

1. जननी - _____, _____।

2. रात - _____, _____।

3. सूरज - _____, _____।

7. निम्नलिखित शब्दों के विलोम शब्द लिखिए?

3

1. अच्छा- _____

2. आज - _____

3. ऊपर - _____

8. निम्नलिखित शब्दों के अर्थ लिखिए।

6

- भेद _____
- समझदार _____
- मोल _____
- बोते _____
- विशाल _____
- खेल- खत्म _____

9. निम्नलिखित शब्दों के वाक्य प्रयोग कीजिए।

4

1. अक्सर _____

2. शक्ति _____

3 अचानक _____

4. सहायता _____

10. निम्नलिखित प्रश्नों के उत्तर दीजिए।

8

प्र.1. नदी किनारे किसका पेड़ था?

प्र.2. हंस नदी में क्या कर रहा था?

प्र.3. गुब्बारा लेकर कौन आया है?

प्र.4. पिकू गिनती बोलते हुए क्यों रुक गया?

प्र.5. राजू कहां छुपा था?

प्र.6 कविता में रंगों के कितने भेद बताए गए हैं?

प्र.7. कविता में किसकी डोर को मिट्टी में पकड़ने के लिए कहा गया है?

प्र.8. गुब्बारे के फट जाने पर क्या होगा?

11. दी गई पहेलियों के उत्तर लिखिए।

2

1. टिक टिक करती जाए, बिना हिले-डुले समय बताएं। सभी के हाथ और घर में पाई जाए।


2. बाहर से है रंग हरा, रस से राहत भरा भरा।

लाल लाल शरबत पिलाऊं गर्मी में, मैं प्यास बुझाऊं।

12. दिए गए चित्रों को देखकर उनके नाम लिखिए

2

1.



2



Silver Grove School

Sample Paper -B(2025-2026)

CLASS- 1
SUBJECT: Hindi 1

Name :

Roll no :

निर्देश: सभी प्रश्नों को करना अनिवार्य है।

1. निम्नलिखित कथनों को पढ़कर उचित विकल्प को चुनिए।

5

1. किताब शब्द का पर्यायवाची शब्द क्या होगा?

i. फूल

ii. अपनी

iii. पुस्तक

2. मानव शब्द का समानार्थी शब्द है-

i. मनुष्य

ii. आकाश

iii. दिवस

3. जो मूर्ति बनाएं वाक्यांश के लिए उपयुक्त शब्द क्या होगा?

i. मूर्तिकार

ii. चित्रकार

iii. कुम्हार

4. जिसके पास धन हो वाक्यांश के लिए उपयुक्त शब्द पहचानिए।

i. निर्धन

ii. धनी

iii. कुम्हार

5. पेड़ बड़ा है। वाक्य में विशेषण शब्द क्या है ?

i. सुंदर

ii. बड़ा

iii. दोनों

2. नीचे दिए गए वाक्य में क्रिया शब्द भरिए।

4

i. _____ और मोर जंगल में रहते हैं।

ii. मदारी _____ और बंदरिया को नचा रहा है।

iii. दादाजी अखबार _____ रहे हैं।

iv. लड़का लट्टू से _____ रहा है।

3. सही मिलान कीजिए। 2

पेड़ चार

अनार पीले

आम हाथी

मोटा लंबा

4. संज्ञा की परिभाषा लिखिए।

2

5. कौन, कितना या कैसा है लिखिए- 4

1. इमली(चित्र) _____
2. 3 सेब (चित्र)_____
3. लाल गुब्बारा(चित्र) _____
4. दो हाथी (चित्र) _____

6. नाम लिखिए।

8

- i. दो पालतू पशुओं के नाम _____
- ii. दो पक्षियों के नाम _____
- iii. दो सब्जियों के नाम _____
- iv. दो फलों के नाम _____

7. निम्नलिखित उल्टे अर्थ वाले शब्द चुनकर सही जगह पर लिखिए।

5

(रात , देर , बुरा, प्रतिदिन , नरम)

अच्छा _____ दिन _____

कठोर _____ जल्दी _____

अक्सर _____

8. नीचे दिए गए प्रश्नों के उत्तर लिखिए ।

5

प्र.1. आपकी कितनी आंखें हैं?

प्र.2. आपकी कितनी नाक है?


प्र.3. आपके कितने पर हैं?

प्र.4. आपके कितने हाथ हैं?

प्र.5. आप अपने घर में कौन-कौन से काम करते हैं?

9. दिए गए चित्रों को गिनकर शब्दों और अंकों में लिखिए।

4



10. उपर्युक्त गद्यांश पढ़कर प्रश्नों के उत्तर दीजिए।

6

आज गुंजन बहुत उदास थी। वह बाहर जाकर खेलना चाहती थी, परंतु बाहर तेज बारिश हो रही थी। मां ने गुंजन को उदास देखा तब मां ने गुंजन के पास जाकर कहा आज हम घर के अंदर एक तंबू बनाएंगे और हम दोनों खेलेंगे। मां की बात सुनकर गुंजन बहुत खुश हुई, क्योंकि अब बारिश का दिन उसके लिए सुखद दिन बन गया था और उसने उस दिन अपने मां के साथ पूरा दिन बिताया।

प्र.1. गुंजन बाहर जाकर क्या करना चाहती थी?

प्र.2. गुंजन की मां ने घर के अंदर क्या बनाने के लिए कहा?

प्र.3. कौन सा दिन गुंजन के लिए सुखद दिन बन गया था?

11. चित्र देखकर पाँच पंक्तियाँ लिखे।

5

(पार्क का चित्र)

Silver Grove School

Sample Paper -B (2025-2026)

CLASS- 1

SUBJECT: EVS

Name :

Roll no :

Q.1 Choose the correct option.

1. . The loud sound is known as the_____.

- a. Thunder. b. Lightning. c rainbow

2.. A person who stitches our cloth is known as_____

- a tailor. b. Watchmen. c cobbler.

3. We get wool from_____.

- a. Dog. b. sheep. c silkworm

4.. We wear cotton clothes in _____ season.

- a. winter. b summer. c. Rainy

5. Which vehicle flies in the sky?

- a) Car. b) Ship. c) Aeroplane

6. Which transport runs on railway tracks?

- a) Bus. b) Car. c) Train

Q.2. Fill in the blanks.

1. We use our _____ to see.

2.Plants need _____ and water to grow.

3.We should drink clean _____.

4. . An animals which is active at night_____.

5. _____is suitable for long distance travelling.

6.. _____help us to put out fire.

Q.3 write 'T' for True and 'F' for False:-

- 1..We should keep our surroundings clean.
- 2.A cow gives us milk.
- 3.We breathe in water.
4. 4. We drink cold milk in winter season.
5. There are three lights in traffic lights.
6. We should play on a road.
7. Always follow the traffic lights.

Q4. Answer the following question.

- 1.. Write the names of four seasons 3.

What gives us light during the day?

4. Name one pet animal.

Q.5. Draw the traffic light and colour it.

Q.6.Match the following

- | | |
|---------|--------------------|
| 1.Sun | a) Night |
| 2.Moon. | b) Gives light |
| 3.Bus. | c) Water transport |
| 4.Boat. | d) Road transport |
| 5.Night | e) Moon & stars |

Q 7. Circle the animal that can be used for travelling.

a.



b.



c.



d.



e.



f.



Silver Grove School

Sample Paper -B(2025-2026)

CLASS- 1

SUBJECT: COMPUTER

TIME: 2 Hrs.

M.M. 50

Name :

Roll no :

Instructions:

- a. Read the question paper carefully.
- b. Attempt all questions. Marks are given against each question.

A. Choose the correct option:-

6

1. What is a pressing of the mouse button once known as?
a) typing. b) clicking. c) scrolling
2. How many buttons are there on a keyboard?
a) 104. b) 106. c) 108
3. Which key is the longest key on a keyboard?
a) Enter key. b) Space bar key. c) Backspace key.
4. What can be carried in your pocket?
a) Pen drive. b) Refrigerator c) Computer
5. Which key is used to erase letter to the right of the cursor?
a) Enter key. b) Space bar key. c) Delete key
6. Which key is used to start a new paragraph?
a) Enter key. b) Space bar key. c) Backspace key

B. Fill in the blanks by the given clues:-

5

(keys, alphabet, 104, numbers, return)

1. A keyboard has _____ on it to give commands to the computer.
2. We use _____ to type words and sentences.
3. A keyboard generally has _____ keys.
4. The _____ keys are also called numeric key.
5. The enter key is also known as the _____ key.

C. Make the pictures of following keys

4

Enter key-

Backspace key-

Arrow keys -

Spacebarkey-

D. Write the full form of the following:-

4.

1. CD

2. CPU

3. CU

4. DVD

F. Rearrange the following words-

4

1.BOARDKEY-

2.LOCKCAPS-

3.VDD-

4.PNE DVERI-

G. Write T for true and F for false:-

6

1. We store things so that we cannot use it in future.

☐

2. CD stands for Compact Disc.

☐

3. The storage capacity of a pen drive is more than a DVD.

☐

4. A keyboard is used for writing on paper

☐




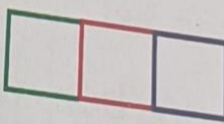



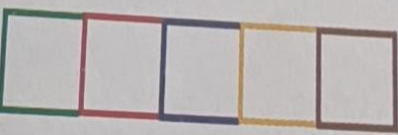
5. Enter key moves the cursor to the next line.

☐

6. The Backspace key is the longest key on a keyboard.

☐

H. Identify and write the names of the storage devices with the help of given clues.4

<p>This storage place keeps footwear.</p>	 	<p>_____</p>
<p>It contains books, notebooks, lunch box, water bottle, and so on.</p>	 	<p>_____</p>
<p>It contains clothes, toys, and so on.</p>	 	<p>_____</p>
<p>It stores computer data.</p>	 	<p>_____</p>

I. Answer the following questions:-

Ques1. What is storage devices ?

Ans _____

Ques2. What is a cursor?

Ans _____

Ques3. What is the use of memory card?

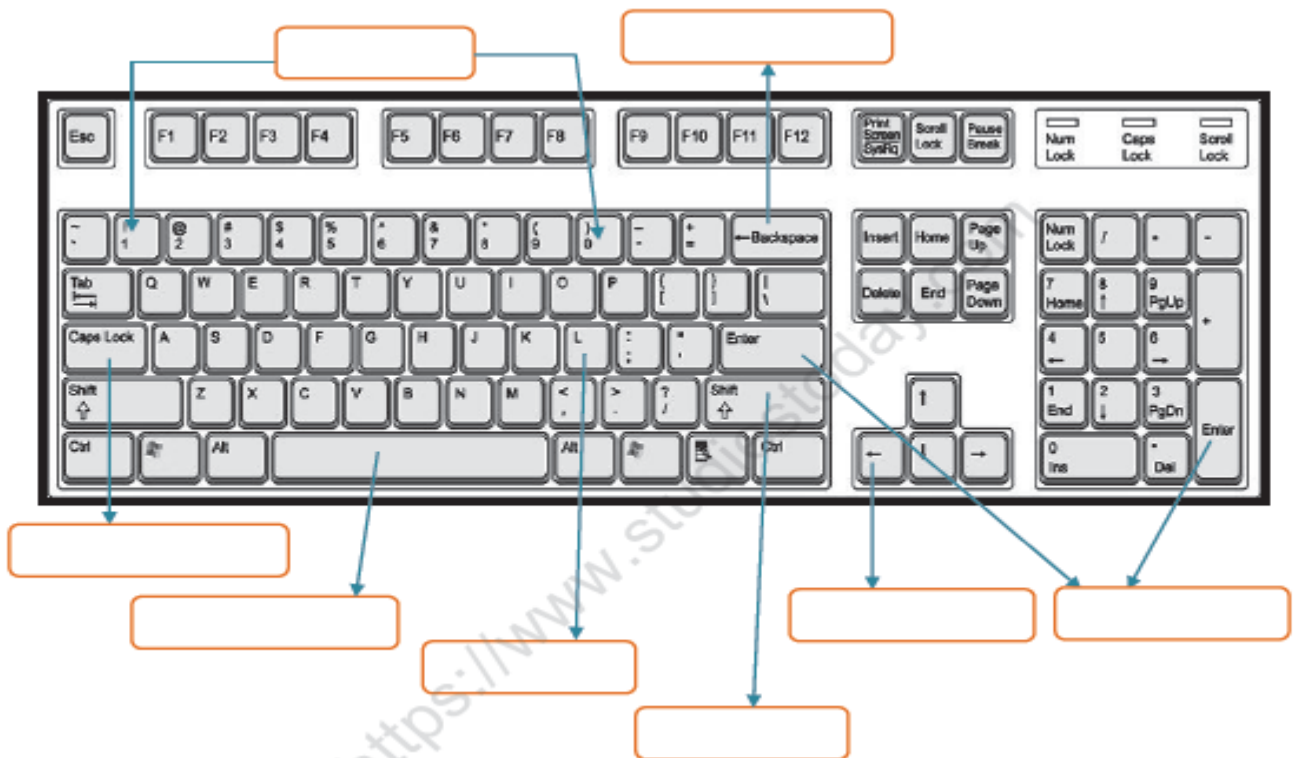
Ans _____

Ques4. What is difference between a CD and a DVD?

Ans _____

J. Look at the picture of a keyboard and label its parts.

5



k. Oral

4



Silver Grove School

Sample Paper B (2025-26))

CLASS- 1

SUBJECT: Mathematics

TIME: 2 Hrs.

M.M. 50

Name: _____

Roll no : _____

Instructions:

- Read the question paper carefully.
- Attempt all questions. Marks are given against each question.

A. Tick the correct option.

1. 6 groups of three means _____

- $6+6$
- $6+6+6$
- $3+3+3+3+3+3$
- $6+6+6+6$

2. Sharing equally means each will get _____

- a different number of objects
- one more number of objects
- an equal number of objects
- one less number of objects

3. If we share 8 toffees equally among 4 children, each child will get _____ toffees.

- 2
- 1
- 3
- 4

4. $5+5+5$ means _____

- 3 groups of 5
- 5 groups of 3
- 5 groups of 5
- 4 groups of 5

5. $3 \times 3 =$ _____

- 7
- 8
- 9
- 6

B. Write the Number Names of the following :-

- a. 160

-
- b. 177

-
- c. 199

-
- d. 184

-
- e. 192

-
- f. 173-
- g. 180-
- h. 153-

C. Write the backward counting from 150 to 100

5

D. Add the following Numbers :-

a) T O b) T O c) T O

4. 7
+ 1 5
[]

3 8
+ 3 9
[]

3. 4
+ 2 8
[]

d) T O e) T O f) T O

5 8
+ 1 8
[]

1 9
+ 4 8
[]

4 7
+ 2 7
[]

E. Subtract the following Numbers:-

3

a) T O b) T O c) T O

7 3
- 2 7
[]

4 2
- 3 8
[]

7 5
- 2 9
[]

c) T O d) T O e) T O

5 5
- 1 8
[]

8 3
- 6 9
[]

7 1
- 3 4
[]

F. Match the given instruction with the correct pictures:-

2

a. A circle inside a square with 2 triangles on the right.

b. A triangle inside a rectangle with 1 circle to the left.

c. A triangle inside a rectangle with 1 circle to the right.

G. Observe the given grid and complete the blank starting from the start position







4

a. When I move 2 squares left, I find a _____.

b. When I move 2 squares downward and take 1 square right, I find a _____.

c. When I move 1 square left and take 2 squares upward, I find a _____.

d. When I move 2 squares upward and take 1 square right, I find a _____.

	 bat		 car	
 can		START		 bike
	 doll		 toy	


H. Fill the numbers in the boxes :-.

3

a. groups of 5 flags each.

$$5 + 5 + 5 = \boxed{}$$


$$\boxed{} \times 5 = \boxed{}$$



b. groups of 2 samosas each.

$$2 + 2 + 2 + 2 + 2 = \boxed{}$$

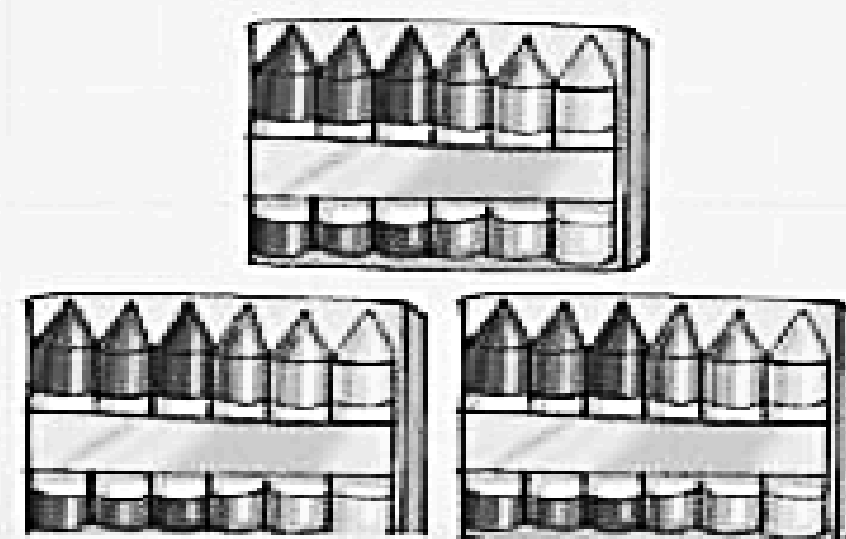
$$5 \times \boxed{} = \boxed{}$$



c. groups of 6 crayons each.

$$6 + 6 + 6 = \boxed{}$$

$$\boxed{} \times 6 = \boxed{}$$



I. Do the multiplication of the following numbers:-

3

a)
$$\begin{array}{r} 1.0 \\ \times 9 \\ \hline \end{array}$$

b)
$$\begin{array}{r} 1.1 \\ \times 4 \\ \hline \end{array}$$

c)
$$\begin{array}{r} 7 \\ \times 8 \\ \hline \end{array}$$







d)
$$\begin{array}{r} 1.6 \\ \times 9 \\ \hline \end{array}$$

b).
$$\begin{array}{r} 6. \\ \times 8 \\ \hline \end{array}$$

f).
$$\begin{array}{r} 4 \\ \times 7 \\ \hline \end{array}$$









J. Tick(✓) the vehicles that move faster-

3

a.		<input type="checkbox"/>		<input type="checkbox"/>
b.		<input type="checkbox"/>		<input type="checkbox"/>
c.		<input type="checkbox"/>		<input type="checkbox"/>

k. Tick(✓) the Earlier stages and Cross(X) out the Later stage

2

a.		<input type="checkbox"/>		<input type="checkbox"/>
b.		<input type="checkbox"/>		<input type="checkbox"/>
c.		<input type="checkbox"/>		<input type="checkbox"/>
d.		<input type="checkbox"/>		<input type="checkbox"/>

K. Word problems.

4

Silver Grove School

Sample Paper -B(2025-2026)

CLASS- 1

SUBJECT: GENERAL KNOWLEDGE

TIME: 2 Hrs.

M.M. 50

Name :

Roll no :

Instructions:

- a. Read the question paper carefully.
- b. Attempt all questions. Marks are given against each quest

Section A

A. Choose the correct option.

1.Which is the largest water animal ?

- a) Elephant b) Tiger c) Blue Whale

2.Our national bird is —

- a) Parrot b) Peacock c) Crow

3.The colour of the sky is —

- a) Red b) Yellow c) Blue

4. Which animal gives us milk?

- a) Dog b) Cat c) Cow

5. Which vehicle runs on track?

- a) Car b) Train c) Boat

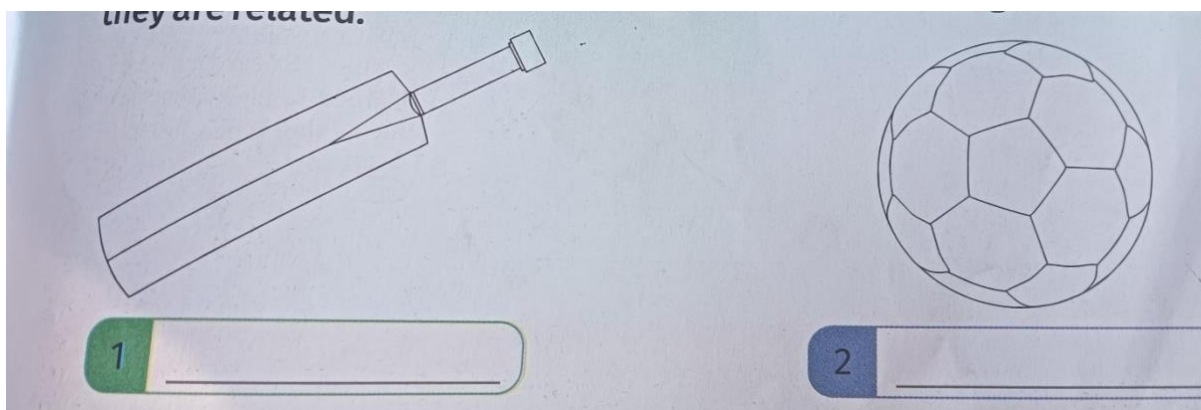
B. Fill in the blanks.

1. Carrom is an _____ game.
2. Close the _____ while brushing teeth.
3. There are _____ lights in traffic signal.
4. _____ is a vegetable.
5. We use our _____ to read a story.

C . Put (✓) or (✗) mark in the given space.

1. Potato is a flower. _____
2. Mahatma Gandhi is known as the father of the nation. _____
3. We should always speak the truth. _____
4. We should take long showers. _____
5. We should not chew our food properly. _____

D. Write the name of the games.



Section B

E. Answer the following question in one word.

1. Who gave the slogan Jai Jawan Jai Kisan?

2. How many colors are there in a rainbow?

3. Which festival is called the festival of colours?

4. Who is known as Netaji?

F. Write the answer in content of first in India.

1. First Prime Minister of India.

2. First Capital of India

G. Current Affairs

1. Who is the President of India?

2. When do we celebrate Republic day?
